

# Questions & Answers

Time : 3 hrs. 20 Min.

for

M.M. : 720

## NEET (UG)-2024

### Important Instructions :

1. The test is of **3 hours 20 minutes** duration and the Test Booklet contains **200** multiple-choice questions (four options with a single correct answer) from **Physics, Chemistry and Biology (Botany and Zoology)**. 50 questions in each subject are divided into **two Sections (A and B)** as per details given below:
  - (a) **Section-A** shall consist of **35 (Thirty-five)** Questions in each subject (Question Nos-1 to 35, 51 to 85, 101 to 135 and 151 to 185). All Questions are compulsory.
  - (b) **Section-B** shall consist of **15 (Fifteen)** questions in each subject (Question Nos- 36 to 50, 86 to 100, 136 to 150 and 186 to 200). In **Section B**, a candidate needs to **attempt any 10 (Ten)** questions out of **15 (Fifteen)** in each subject.

**Candidates are advised to read all 15 questions in each subject of Section B** before they start attempting the question paper. In the event of a candidate attempting more than ten questions, **the first ten questions answered by the candidate shall be evaluated.**
2. Each question carries **4 marks**. For each correct response, the candidate will get **4 marks**. For each incorrect response, **one mark** will be deducted from the total scores. **The maximum marks are 720.**
3. Use **Blue / Black Ball Point Pen only** for writing particulars on this page / marking responses on Answer Sheet.
4. Rough work is to be done in the space provided for this purpose in the Test Booklet only.
5. On completion of the test, the candidate must **hand over the Answer Sheet (ORIGINAL and OFFICE copy) to the Invigilator** before leaving the Room / Hall. The candidates are allowed to take away this Test Booklet with them.
6. **The CODE for this Booklet is Q3. Make sure that the CODE printed on the Original Copy of the Answer Sheet is the same as that on this Test Booklet.** In case of discrepancy, the candidate should immediately report the matter to the Invigilator for replacement of both the Test Booklet and the Answer sheet.
7. The candidates should ensure that the Answer Sheet is not folded. Do not make any stray marks on the Answer Sheet. Do not write your Roll No. anywhere else except in the specified space in the Test Booklet/Answer Sheet.
8. Use of white fluid for correction is **NOT** permissible on the Answer Sheet.
9. Each candidate must show on-demand his/her Admission Card to the Invigilator.
10. No candidate, without special permission of the Centre Superintendent or Invigilator, would leave his/her seat.
11. Use of Electronic/Manual Calculator is prohibited.
12. The candidates are governed by all Rules and Regulations of the examination with regard to their conduct in the Examination Room / Hall. All cases of unfair means will be dealt with as per Rules and Regulations of this examination.
13. **No part of the Test Booklet and Answer Sheet shall be detached under any circumstances.**
14. The candidates will write the Correct Test Booklet Code as given in the Test Booklet / Answer Sheet in the Attendance Sheet.

- (3)  $100N$  (4)  $10(N + 1)$

**Answer (2)**

2. If the monochromatic source in Young's double slit experiment is replaced by white light, then
- (1) Interference pattern will disappear.
  - (2) There will be a central dark fringe surrounded by a few coloured fringes.
  - (3) There will be a central bright white fringe surrounded by a few coloured fringes.
  - (4) All bright fringes will be of equal width.

**Answer (3)**

3. A logic circuit provides the output  $Y$  as per the following truth table :

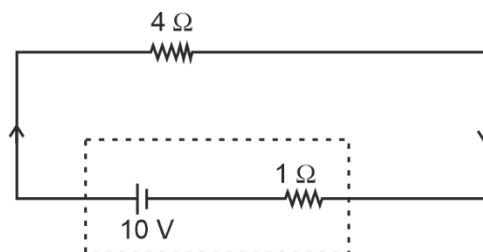
$A$	$B$	$Y$
0	0	1
0	1	0
1	0	1
1	1	0

The expression for the output  $Y$  is :

- (1)  $A \cdot B + \bar{A}$
- (2)  $A \cdot \bar{B} + \bar{A}$
- (3)  $\bar{B}$
- (4)  $B$

**Answer (3)**

4. The terminal voltage of the battery, whose emf is 10 V and internal resistance  $1 \Omega$ , when connected through an external resistance of  $4 \Omega$  as shown in the figure is:



- (1) 4 V
- (2) 6 V
- (3) 8 V
- (4) 10 V

**Answer (3)**

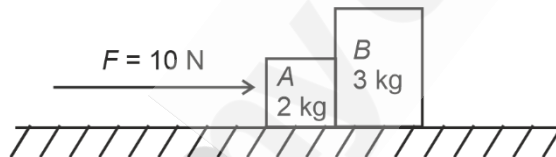
**Answer (4)**

6. A wire of length ' $l$ ' and resistance  $100 \Omega$  is divided into 10 equal parts. The first 5 parts are connected in series while the next 5 parts are connected in parallel. The two combinations are again connected in series. The resistance of this final combination is:

- (1)  $26 \Omega$  (2)  $52 \Omega$   
 (3)  $55 \Omega$  (4)  $60 \Omega$

**Answer (2)**

7. A horizontal force  $10 \text{ N}$  is applied to a block  $A$  as shown in figure. The mass of blocks  $A$  and  $B$  are  $2 \text{ kg}$  and  $3 \text{ kg}$  respectively. The blocks slide over a frictionless surface. The force exerted by block  $A$  on block  $B$  is :



- (1) Zero (2)  $4 \text{ N}$   
 (3)  $6 \text{ N}$  (4)  $10 \text{ N}$

**Answer (3)**

8. A tightly wound 100 turns coil of radius  $10 \text{ cm}$  carries a current of  $7 \text{ A}$ . The magnitude of the magnetic field at the centre of the coil is (Take permeability of free space as  $4\pi \times 10^{-7} \text{ SI units}$ ):

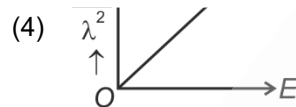
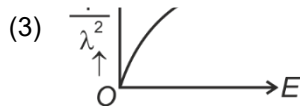
- (1)  $44 \text{ mT}$  (2)  $4.4 \text{ T}$   
 (3)  $4.4 \text{ mT}$  (4)  $44 \text{ T}$

**Answer (3)**

9. In an ideal transformer, the turns ratio is  $\frac{N_P}{N_S} = \frac{1}{2}$ . The ratio  $V_S : V_P$  is equal to (the symbols carry their usual meaning) :

- (1)  $1 : 2$   
 (2)  $2 : 1$   
 (3)  $1 : 1$   
 (4)  $1 : 4$

**Answer (2)**



**Answer (4)**

11. Given below are two statements:

**Statement I:** Atoms are electrically neutral as they contain equal number of positive and negative charges.

**Statement II:** Atoms of each element are stable and emit their characteristic spectrum.

In the light of the above statements, choose the *most appropriate* answer from the options given below.

- (1) Both Statement I and Statement II are correct
- (2) Both Statement I and Statement II are incorrect
- (3) Statement I is correct but Statement II is incorrect
- (4) Statement I is incorrect but Statement II is correct

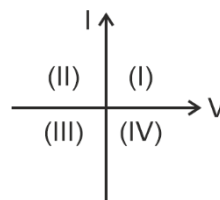
**Answer (3)**

12. A bob is whirled in a horizontal plane by means of a string with an initial speed of  $\omega$  rpm. The tension in the string is  $T$ . If speed becomes  $2\omega$  while keeping the same radius, the tension in the string becomes:

- (1)  $T$
- (2)  $4T$
- (3)  $\frac{T}{4}$
- (4)  $\sqrt{2}T$

**Answer (2)**

13. Consider the following statements A and B and identify the correct answer:



A. For a solar-cell, the I-V characteristics lies in the IV quadrant of the given graph.

B. In a reverse biased *pn* junction diode, the current measured in ( $\mu\text{A}$ ), is due to majority charge carriers.

- (1) A is correct but B is incorrect
- (2) A is incorrect but B is correct
- (3) Both A and B are correct
- (4) Both A and B are incorrect

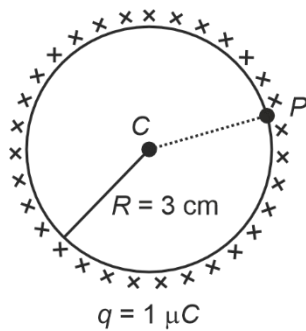
**Answer (1)**

- (1) Zero (2) 30 J  
 (3) -90 J (4) -60 J

**Answer (1)**

15. A thin spherical shell is charged by some source. The potential difference between the two points  $C$  and  $P$  (in  $V$ ) shown in the figure is:

(Take  $\frac{1}{4\pi\epsilon_0} = 9 \times 10^9$  SI units)



- (1)  $3 \times 10^5$  (2)  $1 \times 10^5$   
 (3)  $0.5 \times 10^5$  (4) Zero

**Answer (4)**

16. The moment of inertia of a thin rod about an axis passing through its mid point and perpendicular to the rod is  $2400 \text{ g cm}^2$ . The length of the  $400 \text{ g}$  rod is nearly:

- (1) 8.5 cm (2) 17.5 cm  
 (3) 20.7 cm (4) 72.0 cm

**Answer (1)**

17. A particle moving with uniform speed in a circular path maintains:

- (1) Constant velocity  
 (2) Constant acceleration  
 (3) Constant velocity but varying acceleration  
 (4) Varying velocity and varying acceleration

**Answer (4)**





**List-I  
(Material)**

- A. Diamagnetic
- B. Ferromagnetic
- C. Paramagnetic
- D. Non-magnetic

**List-II  
(Susceptibility ( $\chi$ ))**

- I.  $\chi = 0$
- II.  $0 > \chi \geq -1$
- III.  $\chi \gg 1$
- IV.  $0 < \chi < \varepsilon$  (a small positive number)

Choose the correct answer from the options given below

- (1) A-II, B-III, C-IV, D-I
- (2) A-II, B-I, C-III, D-IV
- (3) A-III, B-II, C-I, D-IV
- (4) A-IV, B-III, C-II, D-I

**Answer (1)**

29. Two bodies *A* and *B* of same mass undergo completely inelastic one dimensional collision. The body *A* moves with velocity  $v_1$  while body *B* is at rest before collision. The velocity of the system after collision is  $v_2$ . The ratio  $v_1 : v_2$  is

- (1) 1 : 2
- (2) 2 : 1
- (3) 4 : 1
- (4) 1 : 4

**Answer (2)**

30.  ${}_{82}^{290}\text{X} \xrightarrow{\alpha} \text{Y} \xrightarrow{e^+} \text{Z} \xrightarrow{\beta^-} \text{P} \xrightarrow{e^-} \text{Q}$

In the nuclear emission stated above, the mass number and atomic number of the product *Q* respectively, are

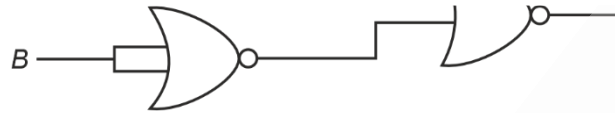
- (1) 280, 81
- (2) 286, 80
- (3) 288, 82
- (4) 286, 81

**Answer (4)**

31. If  $x = 5 \sin\left(\pi t + \frac{\pi}{3}\right) m$  represents the motion of a particle executing simple harmonic motion, the amplitude and time period of motion, respectively, are

- (1) 5 cm, 2 s
- (2) 5 m, 2 s
- (3) 5 cm, 1 s
- (4) 5 m, 1 s

**Answer (2)**



- (1) NAND gate (2) NOR gate  
 (3) OR gate (4) AND gate

**Answer (4)**

34. Given below are two statements: one is labelled as **Assertion A** and the other is labelled as **Reason R**.

**Assertion A:** The potential ( $V$ ) at any axial point, at 2 m distance ( $r$ ) from the centre of the dipole of dipole moment vector  $\vec{P}$  of magnitude,  $4 \times 10^{-6}$  C m, is  $\pm 9 \times 10^3$  V.

(Take  $\frac{1}{4\pi\epsilon_0} = 9 \times 10^9$  SI units)

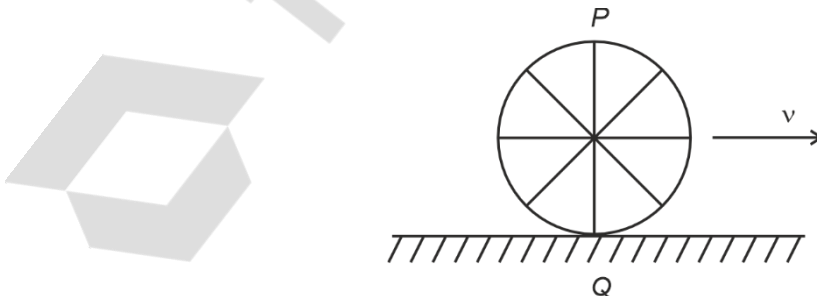
**Reason R:**  $V = \pm \frac{2P}{4\pi\epsilon_0 r^2}$ , where  $r$  is the distance of any axial point, situated at 2 m from the centre of the dipole.

In the light of the above statements, choose the **correct** answer from the options given below:

- (1) Both A and R are true and R is the correct explanation of A.  
 (2) Both A and R are true and R is NOT the correct explanation of A.  
 (3) A is true but R is false.  
 (4) A is false but R is true.

**Answer (3)**

35. A wheel of a bullock cart is rolling on a level road as shown in the figure below. If its linear speed is  $v$  in the direction shown, which one of the following options is correct ( $P$  and  $Q$  are any highest and lowest points on the wheel, respectively)?



- (1) Point  $P$  moves slower than point  $Q$   
 (2) Point  $P$  moves faster than point  $Q$   
 (3) Both the points  $P$  and  $Q$  move with equal speed  
 (4) Point  $P$  has zero speed

**Answer (2)**

**Answer (2)**

37. The property which is not of an electromagnetic wave travelling in free space is that:

- (1) They are transverse in nature
- (2) The energy density in electric field is equal to energy density magnetic field
- (3) They travel with a speed equal to  $\frac{1}{\sqrt{\mu_0 \epsilon_0}}$
- (4) They originate from charges moving with uniform speed

**Answer (4)**

38. A small telescope has an objective of focal length 140 cm and an eye piece of focal length 5.0 cm. The magnifying power of telescope for viewing a distant object is:

- (1) 34
- (2) 28
- (3) 17
- (4) 32

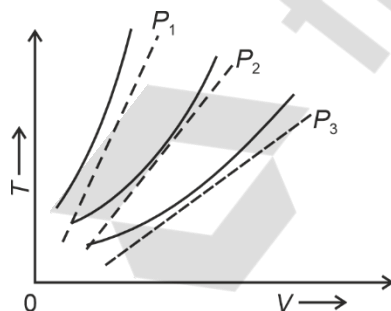
**Answer (2)**

39. Two heaters A and B have power rating of 1 kW and 2 kW, respectively. Those two are first connected in series and then in parallel to a fixed power source. The ratio of power outputs for these two cases is:

- (1) 1 : 1
- (2) 2 : 9
- (3) 1 : 2
- (4) 2 : 3

**Answer (2)**

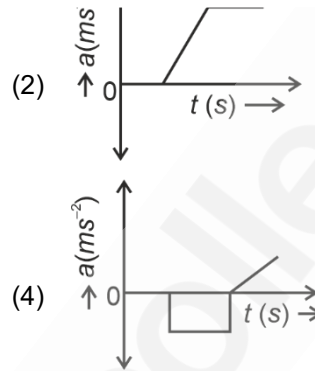
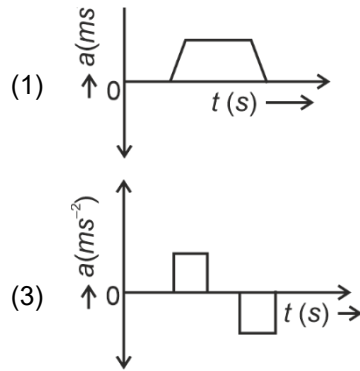
40. The following graph represents the T-V curves of an ideal gas (where T is the temperature and V the volume) at three pressures  $P_1$ ,  $P_2$  and  $P_3$  compared with those of Charles's law represented as dotted lines.



Then the correct relation is:

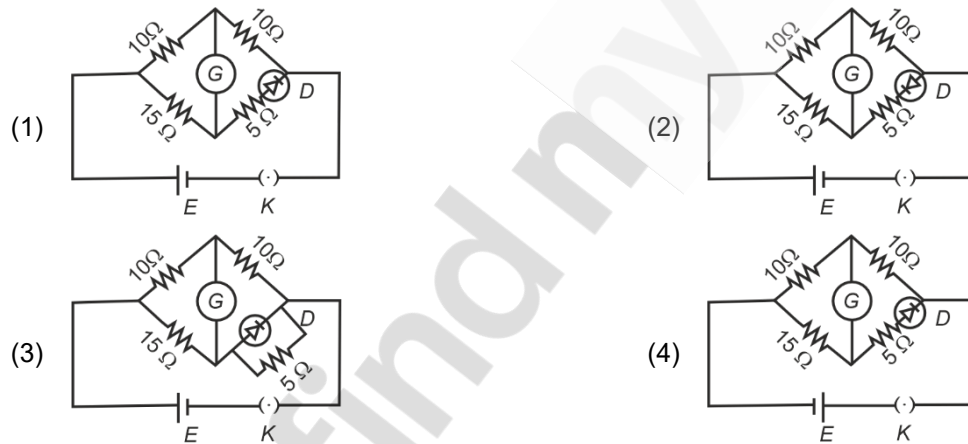
- (1)  $P_3 > P_2 > P_1$
- (2)  $P_1 > P_3 > P_2$
- (3)  $P_2 > P_1 > P_3$
- (4)  $P_1 > P_2 > P_3$

**Answer (4)**



**Answer (3)**

42. Choose the correct circuit which can achieve the bridge balance.



**Answer (1)**

43. If the mass of the bob in a simple pendulum is increased to thrice its original mass and its length is made half its original length, then the new time period of oscillation is  $\frac{x}{2}$  times its original time period. Then the value of x is:

- (1)  $\sqrt{3}$
- (2)  $\sqrt{2}$
- (3)  $2\sqrt{3}$
- (4) 4

**Answer (2)**

(4)  $\frac{GmM}{3R}$

**Answer (1)**

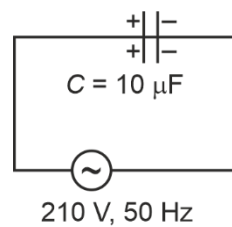
45. A sheet is placed on a horizontal surface in front of a strong magnetic pole. A force is needed to:
- hold the sheet there if it is magnetic.
  - hold the sheet there if it is non-magnetic.
  - move the sheet away from the pole with uniform velocity if it is conducting.
  - move the sheet away from the pole with uniform velocity if it is both, non-conducting and non-polar.

Choose the correct statement(s) from the options given below:

- B and D only
- A and C only
- A, C and D only
- C only

**Answer (2)**

46. A  $10 \mu\text{F}$  capacitor is connected to a 210 V, 50 Hz source as shown in figure. The peak current in the circuit is nearly ( $\pi = 3.14$ ):



- 0.58 A
- 0.93 A
- 1.20 A
- 0.35 A

**Answer (2)**

47. A metallic bar of Young's modulus,  $0.5 \times 10^{11} \text{ N m}^{-2}$  and coefficient of linear thermal expansion  $10^{-5} \text{ }^\circ\text{C}^{-1}$ , length 1 m and area of cross-section  $10^{-3} \text{ m}^2$  is heated from  $0^\circ\text{C}$  to  $100^\circ\text{C}$  without expansion or bending. The compressive force developed in it is :

- $5 \times 10^3 \text{ N}$
- $50 \times 10^3 \text{ N}$
- $100 \times 10^3 \text{ N}$
- $2 \times 10^3 \text{ N}$

**Answer (2)**

(4)  $\frac{M}{\sqrt{3}}$

**Answer (2)**

49. If the plates of a parallel plate capacitor connected to a battery are moved close to each other, then
- A. the charge stored in it, increases.
  - B. the energy stored in it, decreases.
  - C. its capacitance increases.
  - D. the ratio of charge to its potential remains the same.
  - E. the product of charge and voltage increases.

Choose the most appropriate answer from the options given below:

- (1) A, B and E only
- (2) A, C and E only
- (3) B, D and E only
- (4) A, B and C only

**Answer (2)**

50. A force defined by  $F = \alpha t^2 + \beta t$  acts on a particle at a given time  $t$ . The factor which is dimensionless, if  $\alpha$  and  $\beta$  are constants, is:

- (1)  $\frac{\beta t}{\alpha}$
- (2)  $\frac{\alpha t}{\beta}$
- (3)  $\alpha\beta t$
- (4)  $\frac{\alpha\beta}{t}$

**Answer (2)**

- |                           |  |
|---------------------------|--|
|                           | <b>carbon atoms)</b>                       |
| A. ethane                 | I. one $\sigma$ -bond and two $\pi$ -bonds |
| B. ethene                 | II. two $\pi$ -bonds                       |
| C. carbon molecule, $C_2$ | III. one $\sigma$ -bonds                   |
| D. ethyne                 | IV. one $\sigma$ -bond and one $\pi$ -bond |

Choose the correct answer from the options given below:

- (1) A-I, B-IV, C-II, D-III
- (2) A-IV, B-III, C-II, D-I
- (3) A-III, B-IV, C-II, D-I
- (4) A-III, B-IV, C-I, D-II


**Answer (3)**

52. The Henry's law constant ( $K_H$ ) values of three gases (A, B, C) in water are 145,  $2 \times 10^{-5}$  and 35 kbar, respectively. The solubility of these gases in water follow the order:
- (1)  $B > A > C$
  - (2)  $B > C > A$
  - (3)  $A > C > B$
  - (4)  $A > B > C$

**Answer (2)**

53. Given below are two statements:

**Statement I:** The boiling point of hydrides of Group 16 elements follow the order



**Statement II:** On the basis of molecular mass,  $H_2O$  is expected to have lower boiling point than the other members of the group but due to the presence of extensive H-bonding in  $H_2O$ , it has higher boiling point.

In the light of the above statements, choose the correct answer from the options given below:

- (1) Both Statement I and Statement II are true
- (2) Both Statement I and Statement II are false
- (3) Statement I is true but Statement II is false
- (4) Statement I is false but Statement II is true

**Answer (1)**



(4) HF

**Answer (1)**

55. Given below are two statements:

**Statement I :** The boiling point of three isomeric pentanes follows the order

n-pentane > isopentane > neopentane

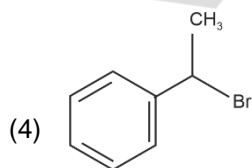
**Statement II :** When branching increases, the molecule attains a shape of sphere. This results in smaller surface area for contact, due to which the intermolecular forces between the spherical molecules are weak, thereby lowering the boiling point.

In the light of the above statements, choose the *most appropriate* answer from the options given below:

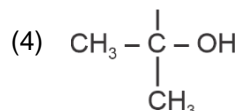
- (1) Both Statement I and Statement II are correct.
- (2) Both Statement I and Statement II are incorrect.
- (3) Statement I is correct but Statement II is incorrect.
- (4) Statement I is incorrect but Statement II is correct.

**Answer (1)**

56. The compound that will undergo  $S_N1$  reaction with the fastest rate is



**Answer (4)**



**Answer (4)**

58. 1 gram of sodium hydroxide was treated with 25 mL of 0.75 M HCl solution, the mass of sodium hydroxide left unreacted is equal to

- (1) 750 mg
- (2) 250 mg
- (3) Zero mg
- (4) 200 mg

**Answer (2)**

59. Arrange the following elements in increasing order of first ionization enthalpy:

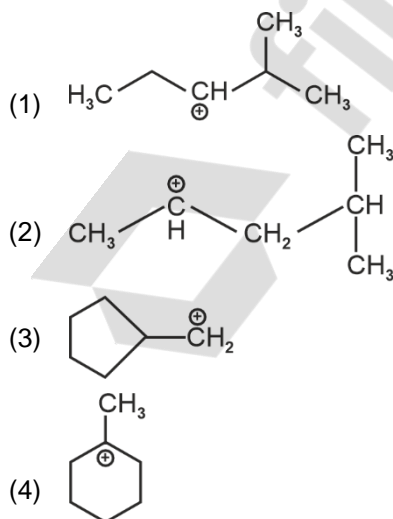
Li, Be, B, C, N

Chose the correct answer from the options given below:

- (1)  $\text{Li} < \text{Be} < \text{B} < \text{C} < \text{N}$
- (2)  $\text{Li} < \text{B} < \text{Be} < \text{C} < \text{N}$
- (3)  $\text{Li} < \text{Be} < \text{C} < \text{B} < \text{N}$
- (4)  $\text{Li} < \text{Be} < \text{N} < \text{B} < \text{C}$

**Answer (2)**

60. The most stable carbocation among the following is :



**Answer (4)**

**Statement I :** Aniline does not undergo Friedel-Crafts alkylation reaction.

**Statement II :** Aniline cannot be prepared through Gabriel synthesis.

In the light of the above statements, choose the *correct* answer from the options given below:

- (1) Both statement I and Statement II are true
- (2) Both Statement I and Statement II are false
- (3) Statement I is correct but Statement II is false
- (4) Statement I is incorrect but Statement II is true

**Answer (1)**

63. Arrange the following elements in increasing order of electronegativity:

N, O, F, C, Si

Choose the correct answer from the options given below:

- (1)  $\text{Si} < \text{C} < \text{N} < \text{O} < \text{F}$
- (2)  $\text{Si} < \text{C} < \text{O} < \text{N} < \text{F}$
- (3)  $\text{O} < \text{F} < \text{N} < \text{C} < \text{Si}$
- (4)  $\text{F} < \text{O} < \text{N} < \text{C} < \text{Si}$

**Answer (1)**

64. Match List I with List II.

<b>List I</b>	<b>List II</b>
<b>(Conversion)</b>	<b>(Number of Faraday required)</b>
A. 1 mol of $\text{H}_2\text{O}$ to $\text{O}_2$	I. 3F
B. 1 mol of $\text{MnO}_4^-$ to $\text{Mn}^{2+}$	II. 2F
C. 1.5 mol of Ca from molten $\text{CaCl}_2$	III. 1F
D. 1 mol of $\text{FeO}$ to $\text{Fe}_2\text{O}_3$	IV. 5F

Choose the correct answer from the options given below:

- (1) A-II, B-IV, C-I, D-III
- (2) A-III, B-IV, C-I, D-II
- (3) A-II, B-III, C-I, D-IV
- (4) A-III, B-IV, C-II, D-I

**Answer (1)**

- (1) A-II, B-III, C-IV, D-I  
 (2) A-I, B-III, C-IV, D-II  
 (3) A-I, B-IV, C-III, D-II  
 (4) A-II, B-IV, C-III, D-I

**Answer (1)**

66. Match List I with List II.

**List I**  
**(Compound)**

- A.  $\text{NH}_3$   
 B.  $\text{BrF}_5$   
 C.  $\text{XeF}_4$   
 D.  $\text{SF}_6$

**List II**  
**(Shape/geometry)**

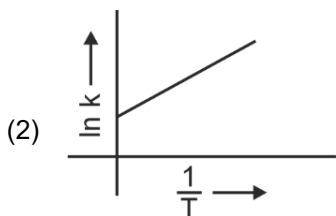
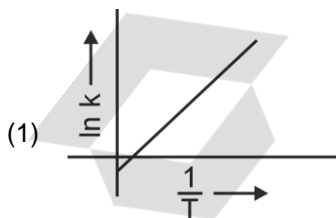
- I. Trigonal Pyramidal  
 II. Square Planar  
 III. Octahedral  
 IV. Square Pyramidal

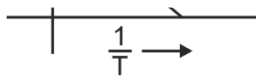
Choose the correct answer from the options given below:

- (1) A-I, B-IV, C-II, D-III  
 (2) A-II, B-IV, C-III, D-I  
 (3) A-III, B-IV, C-I, D-II  
 (4) A-II, B-III, C-IV, D-I

**Answer (1)**

67. Which plot of  $\ln k$  vs  $\frac{1}{T}$  is consistent with Arrhenius equation?





**Answer (4)**

68. The energy of an electron in the ground state ( $n = 1$ ) for  $\text{He}^+$  ion is  $-x$  J, then that for an electron in  $n = 2$  state for  $\text{Be}^{3+}$  ion in J is

- (1)  $-x$
- (2)  $-\frac{x}{9}$
- (3)  $-4x$
- (4)  $-\frac{4}{9}x$

**Answer (1)**

69. In which of the following processes entropy increases?

- A. A liquid evaporates to vapour.
- B. Temperature of a crystalline solid lowered from 130 K to 0 K.
- C.  $2\text{NaHCO}_3(\text{s}) \rightarrow \text{Na}_2\text{CO}_3(\text{s}) + \text{CO}_2(\text{g}) + \text{H}_2\text{O}(\text{g})$
- D.  $\text{Cl}_2(\text{g}) \rightarrow 2\text{Cl}(\text{g})$

Choose the correct answer from the options given below:

- (1) A and C
- (2) A, B and D
- (3) A, C and D
- (4) C and D

**Answer (3)**

70. Which reaction is **NOT** a redox reaction?

- (1)  $\text{Zn} + \text{CuSO}_4 \rightarrow \text{ZnSO}_4 + \text{Cu}$
- (2)  $2\text{KClO}_3 + \text{I}_2 \rightarrow 2\text{KIO}_3 + \text{Cl}_2$
- (3)  $\text{H}_2 + \text{Cl}_2 \rightarrow 2\text{HCl}$
- (4)  $\text{BaCl}_2 + \text{Na}_2\text{SO}_4 \rightarrow \text{BaSO}_4 + 2\text{NaCl}$

**Answer (4)**

electron

Choose the correct answer from the options given below :

- (1) A-I, B-III, C-II, D-IV
- (2) A-III, B-IV, C-I, D-II
- (3) A-III, B-IV, C-II, D-I
- (4) A-II, B-I, C-IV, D-III

**Answer (2)**

72. 'Spin only' magnetic moment is same for which of the following ions?

- A.  $Ti^{3+}$
- B.  $Cr^{2+}$
- C.  $Mn^{2+}$
- D.  $Fe^{2+}$
- E.  $Sc^{3+}$

Choose the most appropriate answer from the options given below.

- (1) B and D only
- (2) A and E only
- (3) B and C only
- (4) A and D only

**Answer (1)**

73. The highest number of helium atoms is in

- (1) 4 mol of helium
- (2) 4 u of helium
- (3) 4 g of helium
- (4) 2.271098 L of helium at STP

**Answer (1)**

74. Among Group 16 elements, which one does **NOT** show  $-2$  oxidation state?

- (1) O
- (2) Se
- (3) Te
- (4) Po

**Answer (4)**

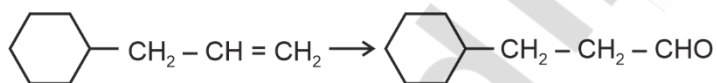
- A. Tollen's reagent
- B. Schiff's reagent
- C. HCN
- D.  $\text{NH}_2\text{OH}$
- E.  $\text{NaHSO}_3$

Choose the correct options from the given below:

- (1) B and C
- (2) A and D
- (3) B and E
- (4) E and D

**Answer (3)**

77. Identify the correct reagents that would bring about the following transformation.



- (1) (i)  $\text{H}_2\text{O}/\text{H}^+$   
(ii)  $\text{CrO}_3$
- (2) (i)  $\text{BH}_3$   
(ii)  $\text{H}_2\text{O}_2 / \text{OH}^\ominus$   
(iii) PCC
- (3) (i)  $\text{BH}_3$   
(ii)  $\text{H}_2\text{O}_2 / \text{OH}^\ominus$   
(iii) alk.  $\text{KMnO}_4$   
(iv)  $\text{H}_3\text{O}^\oplus$
- (4) (i)  $\text{H}_2\text{O}/\text{H}^+$   
(ii) PCC

**Answer (2)**

**Answer (1)**

79. A compound with a molecular formula of  $C_6H_{14}$  has two tertiary carbons. Its IUPAC name is :

- (1) n-hexane
- (2) 2-methylpentane
- (3) 2,3-dimethylbutane
- (4) 2,2-dimethylbutane

**Answer (3)**

80. Fehling's solution 'A' is

- (1) aqueous copper sulphate
- (2) alkaline copper sulphate
- (3) alkaline solution of sodium potassium tartrate (Rochelle's salt)
- (4) aqueous sodium citrate

**Answer (1)**

81. Match List I with List II.

<b>List-I</b> <b>(Process)</b>	<b>List-II</b> <b>(Conditions)</b>
A. Isothermal process	I. No heat exchange
B. Isochoric process	II. Carried out at constant temperature
C. Isobaric process	III. Carried out at constant volume
D. Adiabatic process	IV. Carried out at constant pressure

Choose the correct answer from the options given below:

- (1) A-IV, B-III, C-II, D-I
- (2) A-IV, B-II, C-III, D-I
- (3) A-I, B-II, C-III, D-IV
- (4) A-II, B-III, C-IV, D-I

**Answer (4)**

(4) Statement I is false but Statement II is true

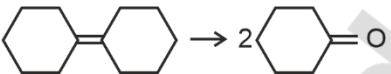
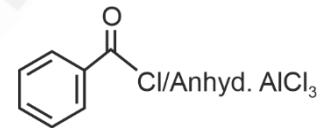
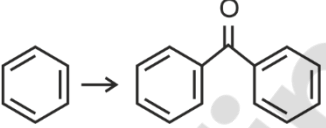

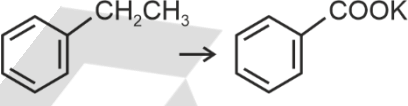
**Answer (1)**

83. On heating, some solid substances change from solid to vapour state without passing through liquid state. The technique used for the purification of such solid substances based on the above principle is known as

- (1) Crystallization
- (2) Sublimation
- (3) Distillation
- (4) Chromatography

**Answer (2)**

84. Match List I with List II.

List I (Reaction)	List II (Reagents/Condition)
<p>A. </p>	<p>I. </p>
<p>B. </p>	<p>II. <math>\text{CrO}_3</math></p>
<p>C. </p>	<p>III. <math>\text{KMnO}_4/\text{KOH}, \Delta</math></p>
<p>D. </p>	<p>IV. (i) <math>\text{O}_3</math> (ii) <math>\text{Zn-H}_2\text{O}</math></p>

Choose the correct answer from the options given below:

- (1) A-IV, B-I, C-III, D-II
- (2) A-III, B-I, C-II, D-IV
- (3) A-IV, B-I, C-II, D-III
- (4) A-I, B-IV, C-II, D-III

**Answer (3)**

**SECTION-B**

86. The pair of lanthanoid ions which are diamagnetic is

- (1)  $\text{Ce}^{4+}$  and  $\text{Yb}^{2+}$
- (2)  $\text{Ce}^{3+}$  and  $\text{Eu}^{2+}$
- (3)  $\text{Gd}^{3+}$  and  $\text{Eu}^{3+}$
- (4)  $\text{Pm}^{3+}$  and  $\text{Sm}^{3+}$

**Answer (1)**

87. Given below are two statements :

**Statement I :**  $[\text{Co}(\text{NH}_3)_6]^{3+}$  is a homoleptic complex whereas  $[\text{Co}(\text{NH}_3)_4\text{Cl}_2]^+$  is a heteroleptic complex.

**Statement II :** Complex  $[\text{Co}(\text{NH}_3)_6]^{3+}$  has only one kind of ligands but  $[\text{Co}(\text{NH}_3)_4\text{Cl}_2]^+$  has more than one kind of ligands.

In the light of the above statements, choose the *correct* answer from the options given below.

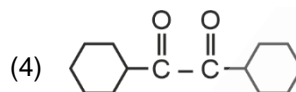
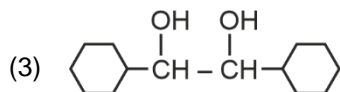
- (1) Both Statement I and Statement II are true
- (2) Both Statement I and Statement II are false
- (3) Statement I is true but Statement II is false
- (4) Statement I is false but Statement II is true

**Answer (1)**

88. Mass in grams of copper deposited by passing 9.6487 A current through a voltmeter containing copper sulphate solution for 100 seconds is (Given : Molar mass of Cu :  $63 \text{ g mol}^{-1}$ ,  $1 \text{ F} = 96487 \text{ C}$ )

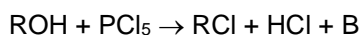
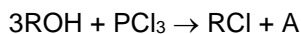
- (1) 3.15 g
- (2) 0.315 g
- (3) 31.5 g
- (4) 0.0315 g

**Answer (2)**



**Answer (2)**

90. The products A and B obtained in the following reactions, respectively, are



(1)  $\text{POCl}_3$  and  $\text{H}_3\text{PO}_3$

(2)  $\text{POCl}_3$  and  $\text{H}_3\text{PO}_4$

(3)  $\text{H}_3\text{PO}_4$  and  $\text{POCl}_3$

(4)  $\text{H}_3\text{PO}_3$  and  $\text{POCl}_3$

**Answer (4)**

91. The rate of a reaction quadruples when temperature changes from  $27^\circ\text{C}$  to  $57^\circ\text{C}$ . Calculate the energy of activation.

Given  $R = 8.314 \text{ J K}^{-1} \text{ mol}^{-1}$ ,  $\log 4 = 0.6021$

(1) 38.04 kJ/mol

(2) 380.4 kJ/mol

(3) 3.80 kJ/mol

(4) 3804 kJ/mol

**Answer (1)**

92. During the preparation of Mohr's salt solution (Ferrous ammonium sulphate), which of the following acid is added to prevent hydrolysis of  $\text{Fe}^{2+}$  ion?

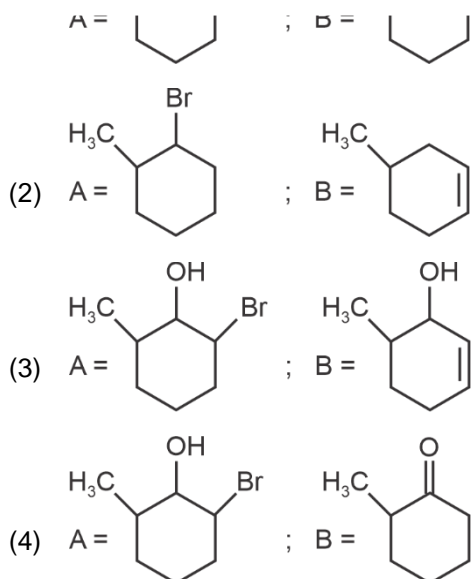
(1) dilute hydrochloric acid

(2) concentrated sulphuric acid

(3) dilute nitric acid

(4) dilute sulphuric acid

**Answer (4)**



**Answer (1)**

94. The plot of osmotic pressure ( $\Pi$ ) vs concentration ( $\text{mol L}^{-1}$ ) for a solution gives a straight line with slope  $25.73 \text{ L bar mol}^{-1}$ . The temperature at which the osmotic pressure measurement is done is

(Use  $R = 0.083 \text{ L bar mol}^{-1} \text{ K}^{-1}$ )

- (1)  $37^\circ\text{C}$
- (2)  $310^\circ\text{C}$
- (3)  $25.73^\circ\text{C}$
- (4)  $12.05^\circ\text{C}$

**Answer (1)**

95. Identify the **correct** answer.
- (1) Three resonance structures can be drawn for ozone
  - (2)  $\text{BF}_3$  has non-zero dipole moment
  - (3) Dipole moment of  $\text{NF}_3$  is greater than that of  $\text{NH}_3$
  - (4) Three canonical forms can be drawn for  $\text{CO}_3^{2-}$  ion

**Answer (4)**

97. Given below are certain cations. Using inorganic qualitative analysis, arrange them in increasing group number from 0 to VI.

- |                     |                     |
|---------------------|---------------------|
| A. $\text{Al}^{3+}$ | B. $\text{Cu}^{2+}$ |
| C. $\text{Ba}^{2+}$ | D. $\text{Co}^{2+}$ |
| E. $\text{Mg}^{2+}$ |                     |

Choose the correct answer from the options given below.

- |                   |                   |
|-------------------|-------------------|
| (1) B, A, D, C, E | (2) B, C, A, D, E |
| (3) E, C, D, B, A | (4) E, A, B, C, D |

**Answer (1)**

98. The work done during reversible isothermal expansion of one mole of hydrogen gas at  $25^\circ\text{C}$  from pressure of 20 atmosphere to 10 atmosphere is

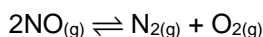
(Given  $R = 2.0 \text{ cal K}^{-1} \text{ mol}^{-1}$ )

- |                       |                        |
|-----------------------|------------------------|
| (1) 0 calorie         | (2) $-413.14$ calories |
| (3) $413.14$ calories | (4) 100 calories       |

**Answer (2)**

99. Consider the following reaction in a sealed vessel at equilibrium with concentrations of

$\text{N}_2 = 3.0 \times 10^{-3} \text{ M}$ ,  $\text{O}_2 = 4.2 \times 10^{-3} \text{ M}$  and  $\text{NO} = 2.8 \times 10^{-3} \text{ M}$ .



If  $0.1 \text{ mol L}^{-1}$  of  $\text{NO}_{(g)}$  is taken in a closed vessel, what will be degree of dissociation ( $\alpha$ ) of  $\text{NO}_{(g)}$  at equilibrium?

- |             |            |
|-------------|------------|
| (1) 0.00889 | (2) 0.0889 |
| (3) 0.8889  | (4) 0.717  |

**Answer (4)**

100. A compound X contains 32% of A, 20% of B and remaining percentage of C. Then, the empirical formula of X is :

(Given atomic masses of A = 64; B = 40; C = 32 u)

- (1)  $\text{A}_2\text{BC}_2$
- (2)  $\text{ABC}_3$
- (3)  $\text{AB}_2\text{C}_2$
- (4)  $\text{ABC}_4$

**Answer (2)**

(4) Carbohydrates

**Answer (2)**

102. How many molecules of ATP and NADPH are required for every molecule of  $\text{CO}_2$  fixed in the Calvin cycle?

- (1) 2 molecules of ATP and 3 molecules of NADPH
- (2) 2 molecules of ATP and 2 molecules of NADPH
- (3) 3 molecules of ATP and 3 molecules of NADPH
- (4) 3 molecules of ATP and 2 molecules of NADPH

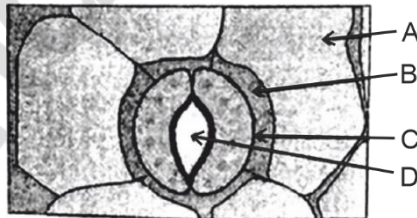
**Answer (4)**

103. Hind II always cuts DNA molecules at a particular point called recognition sequence and it consists of:

- (1) 8 bp
- (2) 6 bp
- (3) 4 bp
- (4) 10 bp

**Answer (2)**

104. In the given figure, which component has thin outer walls and highly thickened inner walls?



- (1) C
- (2) D
- (3) A
- (4) B

**Answer (1)**

105. The cofactor of the enzyme carboxypeptidase is :

- (1) Zinc
- (2) Niacin
- (3) Flavin
- (4) Haem

**Answer (1)**

	List-I		List-II
A.	<i>Rhizopus</i>	I.	Mushroom
B.	<i>Ustilago</i>	II.	Smut fungus
C.	<i>Puccinia</i>	III.	Bread mould
D.	<i>Agaricus</i>	IV.	Rust fungus

Choose the correct answer from the options given below:

- (1) A-III, B-II, C-IV, D-I
- (2) A-I, B-III, C-II, D-IV
- (3) A-III, B-II, C-I, D-IV
- (4) A-IV, B-III, C-II, D-I

**Answer (1)**

108. Given below are two statements:

**Statement I :** Bt toxins are insect group specific and coded by a gene *cry IAc*.

**Statement II :** Bt toxin exists as inactive protoxin in *B. thuringiensis*. However, after ingestion by the insect the inactive protoxin gets converted into active form due to acidic pH of the insect gut.

In the light of the above statements, choose the correct answer from the options given below:

- (1) Both Statement I and Statement II are true
- (2) Both Statement I and Statement II are false
- (3) Statement I is true but Statement II is false
- (4) Statement I is false but Statement II is true

**Answer (3)**

109. Which of the following is an example of actinomorphic flower?

- (1) *Datura*
- (2) *Cassia*
- (3) *Pisum*
- (4) *Sesbania*

**Answer (1)**

111. Identify the set of correct statement:

- A. The flowers of *Vallisneria* are colourful and produce nectar.
- B. The flowers of waterlily are not pollinated by water.
- C. In most of water-pollinated species, the pollen grains are protected from wetting.
- D. Pollen grains of some hydrophytes are long and ribbon like.
- E. In some hydrophytes, the pollen grains are carried passively inside water.

Choose the correct answer from the options given below.

- (1) C, D and E only
- (2) A, B, C and D only
- (3) A, C, D and E only
- (4) B, C, D and E only

**Answer (4)**

112. The lactose present in the growth medium of bacteria is transported to the cell by the action of

- (1) Beta-galactosidase
- (2) Acetylase
- (3) Permease
- (4) Polymerase

**Answer (3)**

113. Match List I with List II

**List I**

- A. *Clostridium butylicum*
- B. *Saccharomyces cerevisiae*
- C. *Trichoderma polysporum*
- D. *Streptococcus sp.*

**List II**

- I. Ethanol
- II. Streptokinase
- III. Butyric acid
- IV. Cyclosporin-A

Choose the correct answer from the options given below:

- (1) A-III, B-I, C-II, D-IV
- (2) A-II, B-IV, C-III, D-I
- (3) A-III, B-I, C-IV, D-II
- (4) A-IV, B-I, C-III, D-II

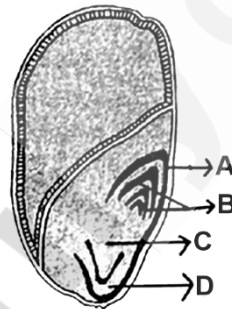
**Answer (3)**

**Answer (3)**

115. Auxin is used by gardeners to prepare weed-free lawns. But no damage is caused to grass as auxin
- (1) promotes apical dominance.
  - (2) promotes abscission of mature leaves only.
  - (3) does not affect mature monocotyledonous plants.
  - (4) can help in cell division in grasses, to produce growth.

**Answer (3)**

116. Identify the part of the seed from the given figure which is destined to form root when the seed germinates.



- (1) A
- (2) B
- (3) C
- (4) D

**Answer (3)**

117. Given below are two statements:

**Statement I :** Parenchyma is living but collenchyma is dead tissue.

**Statement II :** Gymnosperms lack xylem vessels but presence of xylem vessels is the characteristic of angiosperms.

In the light of the above statements, choose the correct answer from the options given below:

- (1) Both Statement I and Statement II are true
- (2) Both Statement I and Statement II are false
- (3) Statement I is true but Statement II is false
- (4) Statement I is false but Statement II is true

**Answer (4)**

- (1) A, C and D only
- (2) A, B, C and D only
- (3) A, B and E only
- (4) A, B and D only

**Answer (4)**

119. Which one of the following is not a criterion for classification of fungi?

- (1) Morphology of mycelium
- (2) Mode of nutrition
- (3) Mode of spore formation
- (4) Fruiting body

**Answer (2)**

120. Identify the type of flowers based on the position of calyx, corolla and androecium with respect to the ovary from the given figures (a) and (b)



- (1) (a) Epigynous; (b) Hypogynous
- (2) (a) Hypogynous; (b) Epigynous
- (3) (a) Perigynous; (b) Epigynous
- (4) (a) Perigynous; (b) Perigynous

**Answer (4)**

121. List of endangered species was released by-

- (1) GEAC
- (2) WWF
- (3) FOAM
- (4) IUCN

**Answer (4)**

- (1) A and B only
- (2) D and E only
- (3) B and C only
- (4) A and E only

**Answer (3)**

123. Which one of the following can be explained on the basis of Mendel's Law of Dominance?
- A. Out of one pair of factors one is dominant and the other is recessive.
  - B. Alleles do not show any expression and both the characters appear as such in  $F_2$  generation.
  - C. Factors occur in pairs in normal diploid plants.
  - D. The discrete unit controlling a particular character is called factor.
  - E. The expression of only one of the parental characters is found in a monohybrid cross.

Choose the correct answer from the options given below:

- (1) A, B and C only
- (2) A, C, D and E only
- (3) B, C and D only
- (4) A, B, C, D and E

**Answer (2)**

124. Inhibition of Succinic dehydrogenase enzyme by malonate is a classical example of:

- (1) Cofactor inhibition
- (2) Feedback inhibition
- (3) Competitive inhibition
- (4) Enzyme activation

**Answer (3)**

125. Formation of interfascicular cambium from fully developed parenchyma cells is an example for

- (1) Differentiation
- (2) Redifferentiation
- (3) Dedifferentiation
- (4) Maturation

**Answer (3)**

- B. Tropical environments are more seasonal.
- C. More solar energy is available in tropics.
- D. Constant environments promote niche specialization.
- E. Tropical environments are constant and predictable.

Choose the correct answer from the options given below.

- (1) A, C, D and E only
- (2) A and B only
- (3) A, B and E only
- (4) A, B and D only

**Answer (1)**

128. Given below are two statements:

**Statement I :** Chromosomes become gradually visible under light microscope during leptotene stage.

**Statement II :** The beginning of diplotene stage is recognized by dissolution of synaptonemal complex.

In the light of the above statements, choose the correct answer from the options given below:

- (1) Both Statement I and Statement II are true
- (2) Both Statement I and Statement II are false
- (3) Statement I is true but Statement II is false
- (4) Statement I is false but Statement II is true

**Answer (1)**

129. Match List I with List II

	List-I		List-II
A.	Nucleolus	I.	Site of formation of glycolipid
B.	Centriole	II.	Organization like the cartwheel
C.	Leucoplasts	III.	Site for active ribosomal RNA synthesis
D.	Golgi apparatus	IV.	For storing nutrients

Choose the correct answer from the options given below:

- (1) A-III, B-II, C-IV, D-I
- (2) A-II, B-III, C-I, D-IV
- (3) A-III, B-IV, C-II, D-I
- (4) A-I, B-II, C-III, D-IV

**Answer (1)**

phenotype/s is/are expected in the progeny?

- (1) Only red flowered plants
- (2) Red flowered as well as pink flowered plants
- (3) Only pink flowered plants
- (4) Red, Pink as well as white flowered plants

**Answer (2)**

132. A transcription unit in DNA is defined primarily by the three regions in DNA and these are with respect to upstream and down stream end;

- (1) Repressor, Operator gene, Structural gene
- (2) Structural gene, Transposons, Operator gene
- (3) Inducer, Repressor, Structural gene
- (4) Promotor, Structural gene, Terminator

**Answer (4)**

133. In a plant, black seed color (BB/Bb) is dominant over white seed color (bb). In order to find out the genotype of the black seed plant, with which of the following genotype will be cross it?

- (1) BB
- (2) bb
- (3) Bb
- (4) BB/Bb

**Answer (2)**

134. Which of the following are required for the dark reaction of photosynthesis?

- A. Light
- B. Chlorophyll
- C.  $\text{CO}_2$
- D. ATP
- E. NADPH

Choose the correct answer from the options given below:

- |                     |                     |
|---------------------|---------------------|
| (1) A, B and C only | (2) B, C and D only |
| (3) C, D and E only | (4) D and E only    |

**Answer (3)**

Choose the correct answer from the options given below:

- (1) A-I, B-II, C-III, D-IV
- (2) A-II, B-I, C-III, D-IV
- (3) A-III, B-IV, C-I, D-II
- (4) A-IV, B-III, C-II, D-I

**Answer (3)**

## SECTION-B

136. The DNA present in chloroplast is:

- (1) Linear, double stranded
- (2) Circular, double stranded
- (3) Linear, single stranded
- (4) Circular, single stranded

**Answer (2)**

137. Match List I with List II

### List I

- A. Robert May
- B. Alexander von Humboldt
- C. Paul Ehrlich
- D. David Tilman

### List II

- I. Species-Area relationship
- II. Long term ecosystem experiment using out door plots
- III. Global species diversity at about 7 million
- IV. Rivet popper hypothesis

Choose the correct answer from the options given below:

- (1) A-II, B-III, C-I, D-IV
- (2) A-III, B-I, C-IV, D-II
- (3) A-I, B-III, C-II, D-IV
- (4) A-III, B-IV, C-II, D-I

**Answer (2)**

Choose the correct answer from the options given below :

- (1) A-II, B-IV, C-I, D-III
- (2) A-I, B-II, C-III, D-IV
- (3) A-IV, B-III, C-II, D-I
- (4) A-II, B-III, C-IV, D-I


**Answer (1)**

139. Which of the following statement is correct regarding the process of replication in *E.coli*?

- (1) The DNA dependent DNA polymerase catalyses polymerization in one direction that is  $3' \rightarrow 5'$
- (2) The DNA dependent RNA polymerase catalyses polymerization in one direction, that is  $5' \rightarrow 3'$
- (3) The DNA dependent DNA polymerase catalyses polymerization in  $5' \rightarrow 3'$  as well as  $3' \rightarrow 5'$  direction
- (4) The DNA dependent DNA polymerase catalyses polymerization in  $5' \rightarrow 3'$  direction

**Answer (4)**

140. Identify the correct description about the given figure:



- (1) Wind pollinated plant inflorescence showing flowers with well exposed stamens.
- (2) Water pollinated flowers showing stamens with mucilaginous covering.
- (3) Cleistogamous flowers showing autogamy.
- (4) Compact inflorescence showing complete autogamy

**Answer (1)**

---

Choose the correct answer from the options given below:

- (1) A-I, B-II, C-III, D-IV
- (2) A-II, B-I, C-IV, D-III
- (3) A-III, B-IV, C-I, D-II
- (4) A-IV, B-III, C-II, D-I

**Answer (2)**

142. Read the following statements and choose the set of correct statements:

In the members of Phaeophyceae,

- A. Asexual reproduction occurs usually by biflagellate zoospores.
- B. Sexual reproduction is by oogamous method only.
- C. Stored food is in the form of carbohydrates which is either mannitol or laminarin.
- D. The major pigments found are chlorophyll a, c and carotenoids and xanthophyll.
- E. Vegetative cells have a cellulosic wall, usually covered on the outside by gelatinous coating of algin.

Choose the correct answer from the options given below:

- (1) A, B, C and D only
- (2) B, C, D and E only
- (3) A, C, D and E only
- (4) A, B, C and E only

**Answer (3)**

143. In an ecosystem if the Net Primary Productivity (NPP) of first trophic level is  $100x$  ( $\text{kcal m}^{-2}$ )  $\text{yr}^{-1}$ , what would be the GPP (Gross Primary Productivity) of the third trophic level of the same ecosystem?

- (1)  $\frac{x}{10}$  ( $\text{kcal m}^{-2}$ )  $\text{yr}^{-1}$
- (2)  $x$  ( $\text{kcal m}^{-2}$ )  $\text{yr}^{-1}$
- (3)  $10x$  ( $\text{kcal m}^{-2}$ )  $\text{yr}^{-1}$
- (4)  $\frac{100x}{3x}$  ( $\text{kcal m}^{-2}$ )  $\text{yr}^{-1}$

**Answer (3)**

- (1) A-IV, B-I, C-II, D-III
- (2) A-I, B-II, C-III, D-IV
- (3) A-II, B-III, C-IV, D-I
- (4) A-III, B-IV, C-I, D-II

**Answer (1)**

145. Identify the step in tricarboxylic acid cycle, which does not involve oxidation of substrate.

- (1) Malic acid → Oxaloacetic acid
- (2) Succinic acid → Malic acid
- (3) Succinyl-CoA → Succinic acid
- (4) Isocitrate →  $\alpha$ -ketoglutaric acid

**Answer (3)**

146. Given below are two statements:

**Statement I:** In  $C_3$  plants, some  $O_2$  binds to RuBisCO, hence  $CO_2$  fixation is decreased.

**Statement II:** In  $C_4$  plants, mesophyll cells show very little photorespiration while bundle sheath cells do not show photorespiration.

In the light of the above statements, choose the *correct* answer from the options given below:

- (1) Both Statement I and Statement II are true
- (2) Both Statement I and Statement II are false
- (3) Statement I is true but Statement II is false
- (4) Statement I is false but Statement II is true

**Answer (3)**

147. Match List I with List II

<b>List I</b> <b>(Types of Stamens)</b>	<b>List II</b> <b>(Example)</b>
A. Monoadelphous	I. Citrus
B. Diadelphous	II. Pea
C. Polyadelphous	III. Lily
D. Epiphyllous	IV. China-rose

148. Match List I with List II

**List I**

- A. Frederick Griffith
- B. Francois Jacob & Jacque
- C. Har Gobind Khorana
- D. Meselson & Stahl

**List II**

- I. Genetic code
- II. Semi-conservative mode of DNA replication
- III. Transformation
- IV. *Lac* operon

Choose the correct answer from the options given below:

- (1) A-III, B-II, C-I, D-IV
- (2) A-III, B-IV, C-I, D-II
- (3) A-II, B-III, C-IV, D-I
- (4) A-IV, B-I, C-II, D-III

**Answer (2)**

149. Which of the following are fused in somatic hybridization involving two varieties of plants?

- (1) Callus
- (2) Somatic embryos
- (3) Protoplasts
- (4) Pollens

**Answer (3)**

150. Spraying sugarcane crop with which of the following plant growth regulators, increases the length of stem, thus, increasing the yield?

- (1) Auxin
- (2) Gibberellin
- (3) Cytokinin
- (4) Abscisic acid

**Answer (2)**

E. SA node

Choose the correct sequence of pathway from the options given below

- (1) E-C-A-D-B (2) A-E-C-B-D  
(3) B-D-E-C-A (4) E-A-D-B-C

**Answer (1)**

152. In both sexes of cockroach, a pair of jointed filamentous structures called anal cerci are present on

- (1) 5<sup>th</sup> segment (2) 10<sup>th</sup> segment  
(3) 8<sup>th</sup> and 9<sup>th</sup> segment (4) 11<sup>th</sup> segment

**Answer (2)**

153. The flippers of the Penguins and Dolphins are the example of the

- (1) Adaptive radiation  
(2) Natural selection  
(3) Convergent evolution  
(4) Divergent evolution

**Answer (3)**

154. Which of the following is not a component of Fallopian tube?

- (1) Uterine fundus (2) Isthmus  
(3) Infundibulum (4) Ampulla

**Answer (1)**

155. Given below are some stages of human evolution.

Arrange them in correct sequence. (Past to Recent)

- A. *Homo habilis*  
B. *Homo sapiens*  
C. *Homo neanderthalensis*  
D. *Homo erectus*

Choose the correct sequence of human evolution from the options given below:

- (1) D-A-C-B (2) B-A-D-C  
(3) C-B-D-A (4) A-D-C-B

**Answer (4)**

- |                               |                    |
|-------------------------------|--------------------|
| B. Cry IAb                    | II. ADA deficiency |
| C. Cry IAc                    | III. Emphysema     |
| D. Enzyme replacement therapy | IV. Corn borer     |

Choose the correct answer form the options given below:

- (1) A-II, B-I, C-IV, D-III
- (2) A-III, B-I, C-II, D-IV
- (3) A-III, B-IV, C-I, D-II
- (4) A-II, B-IV, C-I, D-III

**Answer (3)**

158. Following are the stages of cell division :

- A. Gap 2 phase
- B. Cytokinesis
- C. Synthesis phase
- D. Karyokinesis
- E. Gap 1 phase

Choose the correct sequence of stages from the options given below :

- (1) C-E-D-A-B
- (2) E-B-D-A-C
- (3) B-D-E-A-C
- (4) E-C-A-D-B

**Answer (4)**

159. Which one of the following factors will not affect the Hardy-Weinberg equilibrium?

- (1) Genetic recombination
- (2) Genetic drift
- (3) Gene migration
- (4) Constant gene pool

**Answer (4)**

**Answer (2)**

161. Match List I with List II :

	List I		List II
A.	Typhoid	I.	Fungus
B.	Leishmaniasis	II.	Nematode
C.	Ringworm	III.	Protozoa
D.	Filariasis	IV.	Bacteria

Choose the correct answer from the options given below:

- (1) A-I, B-III, C-II, D-IV
- (2) A-IV, B-III, C-I, D-II
- (3) A-III, B-I, C-IV, D-II
- (4) A-II, B-IV, C-III, D-I

**Answer (2)**


162. Match List I with List II

	List I		List II
A.	Expiratory capacity	I.	Expiratory reserve volume + Tidal volume + Inspiratory reserve volume
B.	Functional residual capacity	II.	Tidal volume + Expiratory reserve volume
C.	Vital capacity	III.	Tidal volume + Inspiratory reserve volume
D.	Inspiratory capacity	IV.	Expiratory reserve volume + Residual volume

Choose the correct answer from the options given below :

- (1) A-II, B-IV, C-I, D-III
- (2) A-III, B-II, C-IV, D-I
- (3) A-II, B-I, C-IV, D-III
- (4) A-I, B-III, C-II, D-IV

**Answer (1)**



Choose the correct answer from the options given below :

- (1) A-I, B-II, C-III, D-IV
- (2) A-II, B-III, C-IV, D-I
- (3) A-III, B-IV, C-I, D-II
- (4) A-IV, B-I, C-II, D-III

**Answer (3)**

164. Given below are two statements : one is labelled as Assertion A and the other is labelled as Reason R :

**Assertion A** : FSH acts upon ovarian follicles in female and Leydig cells in male.

**Reason R** : Growing ovarian follicles secrete estrogen in female while interstitial cells secrete androgen in male human being.

In the light of the above statements, choose the correct answer from the options given below :

- (1) Both A and R are true and R is the correct explanation of A
- (2) Both A and R are true but R is NOT the correct explanation of A
- (3) A is true but R is false
- (4) A is false but R is true

**Answer (4)**

165. Match List I with List II :

	List I		List II
A.	Pleurobrachia	I.	Mollusca
B.	Radula	II.	Ctenophora
C.	Stomochord	III.	Osteichthyes
D.	Air bladder	IV.	Hemichordata

Choose the correct answer from the options given below

- (1) A-IV, B-II, C-III, D-I
- (2) A-II, B-I, C-IV, D-III
- (3) A-II, B-IV, C-I, D-III
- (4) A-IV, B-III, C-II, D-I

**Answer (2)**

D.	Leptotene	IV.	Appearance of recombination nodules
----	-----------	-----	-------------------------------------

Choose the correct answer from the options given below

- (1) A-IV, B-II, C-III, D-I
- (2) A-I, B-II, C-IV, D-III
- (3) A-II, B-IV, C-I, D-III
- (4) A-IV, B-III, C-II, D-I

**Answer (3)**

167. The "Ti plasmid" of *Agrobacterium tumefaciens* stands for

- (1) Tumour inhibiting plasmid
- (2) Tumor independent plasmid
- (3) Tumor inducing plasmid
- (4) Temperature independent plasmid

**Answer (3)**

168. Match List I with List II :

List I	List II
A. Cocaine	I. Effective sedative in surgery
B. Heroin	II. <i>Cannabis sativa</i>
C. Morphine	III. <i>Erythroxyllum</i>
D. Marijuana	IV. <i>Papaver somniferum</i>

Choose the correct answer from the options given below:

- (1) A-IV, B-III, C-I, D-II
- (2) A-I, B-III, C-II, D-IV
- (3) A-II, B-I, C-III, D-IV
- (4) A-III, B-IV, C-I, D-II

**Answer (4)**

170. Match List I with List II :

	List-I		List-II
A.	Pons	I.	Provides additional space for Neurons, regulates posture and balance.
B.	Hypothalamus	II.	Controls respiration and gastric secretions.
C.	Medulla	III.	Connects different regions of the brain.
D.	Cerebellum	IV	Neurosecretory cells

Choose the correct answer from the options given below :

- (1) A-II, B-III, C-I, D-IV
- (2) A-III, B-IV, C-II, D-I
- (3) A-I, B-III, C-II, D-IV
- (4) A-II, B-I, C-III, D-IV

**Answer (2)**

171. Match List I with List II :

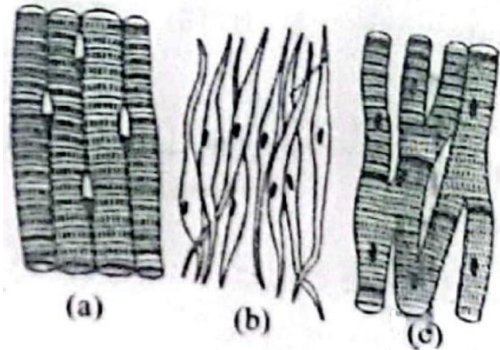
	List-I		List-II
A.	Lipase	I.	Peptide bond
B.	Nuclease	II.	Ester bond
C.	Protease	III.	Glycosidic bond
D.	Amylase	IV	Phosphodiester bond

Choose the correct answer from the options given below :

- (1) A-IV, B-II, C-III, D-I
- (2) A-III, B-II, C-I, D-IV
- (3) A-II, B-IV, C-I, D-III
- (4) A-IV, B-I, C-III, D-II

**Answer (3)**

human body:



Name of muscle/location

- (1) (a) Smooth - Toes  
(b) Skeletal – Legs  
(c) Cardiac – Heart
- (2) (a) Skeletal - Triceps  
(b) Smooth – Stomach  
(c) Cardiac – Heart
- (3) (a) Skeletal - Biceps  
(b) Involuntary – Intestine  
(c) Smooth – Heart
- (4) (a) Involuntary – Nose tip  
(b) Skeletal – Bone  
(c) Cardiac – Heart

**Answer (2)**

174. Which of the following statements is incorrect?

- (1) A bio-reactor provides optimal growth conditions for achieving the desired product
- (2) Most commonly used bio-reactors are of stirring type
- (3) Bio-reactors are used to produce small scale bacterial cultures
- (4) Bio-reactors have an agitator system, an oxygen delivery system foam control system

**Answer (3)**

(3) A is correct but R is not correct

(4) A is not correct but R is correct

**Answer (1)**

176. Which of the following factors are favourable for the formation of oxyhaemoglobin in alveoli?

(1) High  $pO_2$  and High  $pCO_2$

(2) High  $pO_2$  and Lesser  $H^+$  concentration

(3) Low  $pCO_2$  and High  $H^+$  concentration

(4) Low  $pCO_2$  and High temperature

**Answer (2)**

177. Match List I with List II :

**List I**

A. Common cold

B. Haemozoin

C. Widal test

D. Allergy

**List II**

I. *Plasmodium*

II. Typhoid

III. Rhinoviruses

IV. Dust mites

Choose the correct answer from the options given below :

(1) A-II, B-IV, C-III, D-I

(2) A-I, B-III, C-II, D-IV

(3) A-III, B-I, C-II, D-IV

(4) A-IV, B-II, C-III, D-I

**Answer (3)**

178. Consider the following statements :

A. Annelids are true coelomates

B. Poriferans are pseudocoelomates

C. Aschelminthes are acoelomates

D. Platyhelminthes are pseudocoelomates

Choose the correct answer from the options given below :

(1) B only

(2) A only

(3) C only

(4) D only

**Answer (2)**



- (2) A-IV, B-II, C-III, D-I  
 (3) A-II, B-IV, C-I, D-III  
 (4) A-II, B-I, C-IV, D-III

**Answer (4)**

183. Match List I with List II :

<b>List I</b>	<b>List II</b>
A. <i>Pterophyllum</i>	I. Hag fish
B. <i>Myxine</i>	II. Saw fish
C. <i>Pristis</i>	III. Angel fish
D. <i>Exocoetus</i>	IV. Flying fish

Choose the correct answer from the options given below :

- (1) A-II, B-I, C-III, D-IV  
 (2) A-III, B-I, C-II, D-IV  
 (3) A-IV, B-I, C-II, D-III  
 (4) A-III, B-II, C-I, D-IV

**Answer (2)**

184. Match List I with List II :

<b>List I</b>	<b>List II</b>
A. Fibrous joints	I. Adjacent vertebrae, limited movement
B. Cartilaginous joints	II. Humerus and Pectoral girdle, rotational movement
C. Hinge joints	III. Skull, don't allow any movement
D. Ball and socket joints	IV. Knee, help in locomotion

Choose the correct answer from the options given below :

- (1) A-IV, B-II, C-III, D-I  
 (2) A-I, B-III, C-II, D-IV  
 (3) A-II, B-III, C-I, D-IV  
 (4) A-III, B-I, C-IV, D-II

**Answer (4)**

(4) Statement I is false but Statement II is true

**Answer (3)**

### SECTION-B

186. Given below are two statements:

**Statement I:** Gause's competitive exclusion principle states that two closely related species competing for different resources cannot exist indefinitely.

**Statement II:** According to Gause's principle, during competition, the inferior will be eliminated. This may be true if resources are limiting.

In the light of the above statements, choose the correct answer from the options given below :

- (1) Both Statement I and Statement II are true.
- (2) Both Statement I and Statement II are false.
- (3) Statement I is true but Statement II is false.
- (4) Statement I is false but Statement II is true.

**Answer (4)**

187. Match List I with List II related to digestive system of cockroach.

	List-I		List-II
A.	The structures used for storing of food.	I.	Gizzard
B.	Ring of 6-8 blind tubules at junction of foregut and midgut.	II.	Gastric Caeca
C.	Ring of 100-150 yellow coloured thin filaments at junction of midgut and hindgut.	III.	Malpighian tubules

(4) A-III, B-II, C-IV, D-I

**Answer (1)**

188. The following are the statements about non-chordates:

- A. Pharynx is perforated by gill slits.
- B. Notochord is absent.
- C. Central nervous system is dorsal.
- D. Heart is dorsal if present.
- E. Post anal tail is absent.

Choose the most appropriate answer from the options given below:

- (1) A & C only
- (2) A, B & D only
- (3) B, D & E only
- (4) B, C & D only

**Answer (3)**

189. Choose the correct statement given below regarding juxta medullary nephron.

- (1) Juxta medullary nephrons are located in the columns of Bertini.
- (2) Renal corpuscle of juxta medullary nephron lies in the outer portion of the renal medulla.
- (3) Loop of Henle of juxta medullary nephron runs deep into medulla.
- (4) Juxta medullary nephrons outnumber the cortical nephrons.

**Answer (3)**

190. Given below are two statements:

**Statement I:** The cerebral hemispheres are connected by nerve tract known as corpus callosum.

**Statement II:** The brain stem consists of the medulla oblongata, pons and cerebrum.

In the light of the above statements, choose the most appropriate answer from the options given below:

- (1) Both Statement I and Statement II are correct.
- (2) Both Statement I and Statement II are incorrect.
- (3) Statement I is correct but Statement II is incorrect.
- (4) Statement I is incorrect but Statement II is correct.

**Answer (3)**

- (3) Statement I is correct but Statement II is incorrect.
- (4) Statement I is incorrect but Statement II is correct.

**Answer (1)**

192. Regarding catalytic cycle of an enzyme action, select the correct sequential steps :

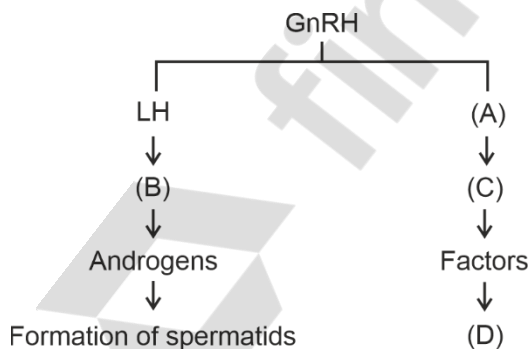
- A. Substrate enzyme complex formation.
- B. Free enzyme ready to bind with another substrate.
- C. Release of products.
- D. Chemical bonds of the substrate broken.
- E. Substrate binding to active site.

Choose the correct answer from the options given below :

- (1) E, A, D, C, B
- (2) A, E, B, D, C
- (3) B, A, C, D, E
- (4) E, D, C, B, A

**Answer (1)**

193. Identify the correct option (A), (B), (C), (D) with respect to spermatogenesis.



- (1) FSH, Leydig cells, Sertoli cells, Spermiogenesis.
- (2) ICSH, Interstitial cells, Leydig cells, spermiogenesis.
- (3) FSH, Sertoli cells, Leydig cells, spermatogenesis.
- (4) ICSH, Leydig cells, Sertoli cells, spermatogenesis.

**Answer (1)**



E.  $i^B/i^A/i^B$

Choose the most appropriate answer from the options given below :

- (1) A only
- (2) B only
- (3) C & B only
- (4) D & E only

**Answer (1)**

198. Match List I with List II :

	List - I		List - II
A.	P wave	I.	Heart muscles are electrically silent.
B.	QRS complex	II.	Depolarisation of ventricles.
C.	T wave	III.	Depolarisation of atria.
D.	T-P gap	IV.	Repolarisation of ventricles.

Choose the correct answer from the options given below :

- (1) A-I, B-III, C-IV, D-II
- (2) A-III, B-II, C-IV, D-I
- (3) A-II, B-III, C-I, D-IV
- (4) A-IV, B-II, C-I, D-III

**Answer (2)**

**Sol.**

- A. P wave - III. Depolarisation of atria.  
 B. QRS complex - II. Depolarisation of ventricles.  
 C. T wave - IV. Repolarisation of ventricles.  
 D. T-P gap - I. Heart muscles are electrically silent.

**NEET2024**

(3) Statement I is correct but Statement II is incorrect.

(4) Statement I is incorrect but Statement II is correct.

**Answer (3)**

200. Match List I with List II :

	List - I		List - II
A.	Exophthalmic goiter	I.	Excess secretion of cortisol, moon face & hyperglycemia.
B.	Acromegaly	II.	Hypo-secretion of thyroid hormone and stunted growth.
C.	Cushing's syndrome	III.	Hyper secretion of thyroid hormone & protruding eye balls.
D.	Cretinism	IV.	Excessive secretion of growth hormone.

Choose the correct answer from the options given below

(1) A-I, B-III, C-II, D-IV

(2) A-IV, B-II, C-I, D-III

(3) A-III, B-IV, C-II, D-I

(4) A-III, B-IV, C-I, D-II

**Answer (4)**

