

Andhra Pradesh State Council of Higher Education



Notations :

- 1.Options shown in green color and with ✓ icon are correct.
- 2.Options shown in red color and with ✗ icon are incorrect.

Question Paper Name :	Electronics and Communication Engineering 06th May 2025 Shift 2
Subject Name :	Electronics and Communication Engineering
Creation Date :	2025-05-06 20:31:52
Duration :	180
Total Marks :	200
Display Marks:	No
Share Answer Key With Delivery Engine :	Yes
Change Font Color :	No
Change Background Color :	No
Change Theme :	No
Help Button :	No
Show Reports :	No
Show Progress Bar :	No

Electronics and Communication Engineering

Group Number :	1
Group Id :	89040175
Group Maximum Duration :	0
Group Minimum Duration :	180
Show Attended Group? :	No
Edit Attended Group? :	No
Break time :	0
Group Marks :	200

Mathematics

Section Id :	890401291
Section Number :	1
Section type :	Online

Mandatory or Optional :	Mandatory
Number of Questions :	50
Number of Questions to be attempted :	50
Section Marks :	50
Maximum Instruction Time :	0
Sub-Section Number :	1
Sub-Section Id :	890401315
Question Shuffling Allowed :	Yes

Question Number : 1 Question Id : 89040114813 Question Type : MCQ Option Shuffling : No
Display Question Number : Yes

Correct Marks : 1 Wrong Marks : 0

Order of the matrix $\begin{bmatrix} 1 & 6 \\ 2 & 0 \\ 7 & -1 \end{bmatrix}$ is

Options :

- ✘ 1×3
- ✔ 3×2
- ✘ 2×2
- ✘ 3×3

Question Number : 2 Question Id : 89040114814 Question Type : MCQ Option Shuffling : No
Display Question Number : Yes

Correct Marks : 1 Wrong Marks : 0

If two rows (or columns) of a determinant of order 3 are identical then the value of determinant is

Options :

- ✔ 0
- ✘ 1
- ✘ -1

4. ✘ -1

Question Number : 3 Question Id : 89040114815 Question Type : MCQ Option Shuffling : No
 Display Question Number : Yes
 Correct Marks : 1 Wrong Marks : 0

Co-factor of -4 in $\begin{vmatrix} 1 & 2 & 3 \\ -4 & 3 & 6 \\ 2 & -7 & 9 \end{vmatrix}$ is

Options :

1. ✘ 3

2. ✘ 11

3. ✘ 39

4. ✔ -39

Question Number : 4 Question Id : 89040114816 Question Type : MCQ Option Shuffling : No
 Display Question Number : Yes
 Correct Marks : 1 Wrong Marks : 0

The Matrix $\begin{bmatrix} a & h & g \\ h & b & f \\ g & f & c \end{bmatrix}$ is

Options :

1. ✘ skew symmetric

2. ✔ Symmetric

3. ✘ symmetric if a=b

4. ✘ Skew symmetric if b=c

Question Number : 5 Question Id : 89040114817 Question Type : MCQ Option Shuffling : No Display Question Number : Yes

Correct Marks : 1 Wrong Marks : 0

If $A = \begin{bmatrix} 0 & 0 & 1 \\ 0 & 1 & 0 \\ 1 & 0 & 0 \end{bmatrix}$ then $(A^{-1}) =$

Options :

1. ✓ A
2. ✗ -A
3. ✗ -2A
4. ✗ 0

Question Number : 6 Question Id : 89040114818 Question Type : MCQ Option Shuffling : No Display Question Number : Yes

Correct Marks : 1 Wrong Marks : 0

If $\deg f(x) \geq \deg g(x)$, then the rational fraction $f(x)/g(x)$ is called

Options :

1. ✗ Polynomial
2. ✗ Proper fraction
3. ✓ Improper fraction
4. ✗ irrational fraction

Question Number : 7 Question Id : 89040114819 Question Type : MCQ Option Shuffling : No Display Question Number : Yes

Correct Marks : 1 Wrong Marks : 0

If $\frac{3x}{x^2+x-2} = \frac{A}{x+2} + \frac{B}{x-1}$ then the ordered pair (A, B) is

Options :

1. ✘ (1, 2)
2. ✘ (-1, 2)
3. ✘ (2, -1)
4. ✔ (2, 1)

Question Number : 8 Question Id : 89040114820 Question Type : MCQ Option Shuffling : No Display Question Number : Yes

Correct Marks : 1 Wrong Marks : 0

If $\tan A = \frac{4}{3}$ then the value of $\cos 2A$ is

Options :

1. ✔ $-\frac{7}{25}$
2. ✘ $-\frac{7}{24}$
3. ✘ $-\frac{24}{7}$
4. ✘ $-\frac{7}{25}$

Question Number : 9 Question Id : 89040114821 Question Type : MCQ Option Shuffling : No Display Question Number : Yes

Correct Marks : 1 Wrong Marks : 0

If $-1 \leq x \leq 1$, then $\cos^{-1} x + \sin^{-1} x =$

Options :

1. ✘ $-\frac{\pi}{2}$

2. ✘ $\frac{\pi}{4}$

3. ✔ $\frac{\pi}{2}$

4. ✘ $-\frac{\pi}{16}$

Question Number : 10 Question Id : 89040114822 Question Type : MCQ Option Shuffling : No Display Question Number : Yes

Correct Marks : 1 Wrong Marks : 0

$\sin 15^\circ =$

Options :

1. ✘ $\frac{\sqrt{3}-1}{\sqrt{3}+2}$

2. ✔ $\frac{\sqrt{6}-\sqrt{2}}{4}$

3. ✘ $\sqrt{6} \pm 1$

4. ✘ $\frac{\sqrt{6}+\sqrt{2}}{4}$

Question Number : 11 Question Id : 89040114823 Question Type : MCQ Option Shuffling : No Display Question Number : Yes

Correct Marks : 1 Wrong Marks : 0

If $2 \cos \theta = x + \frac{1}{x}$ then $2 \cos 3\theta =$

Options :

1. ✘ $x^3 - \frac{1}{x^3}$

2. ✘ $-x^3 + \frac{1}{x^3}$

3. ✔ $x^3 + \frac{1}{x^3}$

4. ✘ $x^2 + \frac{1}{x^3}$

Question Number : 12 Question Id : 89040114824 Question Type : MCQ Option Shuffling : No Display Question Number : Yes

Correct Marks : 1 Wrong Marks : 0

In any ΔABC , $\tan \frac{B+C}{2} =$

Options :

1. ✘ $c \cot \frac{A}{2}$

2. ✔ $\cot \frac{A}{2}$

3. ✘ $\tan \frac{A}{2}$

4. ✘ $\tan \frac{C}{2}$

Question Number : 13 Question Id : 89040114825 Question Type : MCQ Option Shuffling : No

Display Question Number : Yes
Correct Marks : 1 Wrong Marks : 0

In a triangle ΔABC , the value of $\cos\left(\frac{B+C}{2}\right)$ in terms of angle A

Options :

1. ✘ $\sqrt{\sin\frac{A}{2}}$

2. ✘ $\sqrt{A/2}$

3. ✔ $\sin\frac{A}{2}$

4. ✘ $\sqrt{2A}$

Question Number : 14 Question Id : 89040114826 Question Type : MCQ Option Shuffling : No
Display Question Number : Yes
Correct Marks : 1 Wrong Marks : 0

The value of $\sin 45^\circ$ is

Options :

1. ✘ $\sqrt{2}$

2. ✘ 1

3. ✘ 0

4. ✔ $1/\sqrt{2}$

Question Number : 15 Question Id : 89040114827 Question Type : MCQ Option Shuffling : No
Display Question Number : Yes
Correct Marks : 1 Wrong Marks : 0

In a ΔABC , if $a = 13$, $b = 14$ and $c = 15$ then the value of $\tan\left(\frac{A}{2}\right)$ is

Options :

1. ✘ $\frac{1}{4}$

2. ✘ $\frac{3}{4}$

3. ✔ $\frac{1}{2}$

4. ✘ $\frac{1}{6}$

Question Number : 16 Question Id : 89040114828 Question Type : MCQ Option Shuffling : No Display Question Number : Yes

Correct Marks : 1 Wrong Marks : 0

In a ΔABC , $\sum a^3 \cos(B - C) =$

Options :

1. ✘ $4abc$

2. ✔ $3abc$

3. ✘ $4a+b+c$

4. ✘ abc

Question Number : 17 Question Id : 89040114829 Question Type : MCQ Option Shuffling : No Display Question Number : Yes

Correct Marks : 1 Wrong Marks : 0

Principle value of $\cot^{-1}(-1)$ is

Options :

1. ✘ $\frac{2\pi}{3}$

2. ✘ $-\frac{2\pi}{3}$

3. ✘ π

4. ✔ $\frac{3\pi}{4}$

Question Number : 18 Question Id : 89040114830 Question Type : MCQ Option Shuffling : No Display Question Number : Yes

Correct Marks : 1 Wrong Marks : 0

$$(-1 + 2i) + \left(\frac{1}{2} - i\right) =$$

Options :

1. ✘ $\frac{1}{2} + i$

2. ✘ $-\frac{1}{2} - i$

3. ✔ $-\frac{1}{2} + i$

4. ✘ $\frac{1}{2} \pm i$

Question Number : 19 Question Id : 89040114831 Question Type : MCQ Option Shuffling : No Display Question Number : Yes

Correct Marks : 1 Wrong Marks : 0

$$\text{For any real } \theta, (\cos \theta + i \sin \theta)(\cos \theta - i \sin \theta) =$$

Options :

1. ✓ 1
2. ✗ -1
3. ✗ 0
4. ✗ 4i

Question Number : 20 Question Id : 89040114832 Question Type : MCQ Option Shuffling : No Display Question Number : Yes

Correct Marks : 1 Wrong Marks : 0

The centre and radius of the circle $x^2 + y^2 - 4x - 8y - 41 = 0$ are

Options :

1. ✗ (1, -2), 5
2. ✗ (2,1), 3
3. ✓ (2,4), $\sqrt{61}$
4. ✗ (1, -2), $\sqrt{51}$

Question Number : 21 Question Id : 89040114833 Question Type : MCQ Option Shuffling : No Display Question Number : Yes

Correct Marks : 1 Wrong Marks : 0

The number of common tangents to the circles $x^2 + y^2 - x = 0$ and $x^2 + y^2 + x = 0$ is

Options :

1. ✗ 2
2. ✗ 1

3. ✘ 4

4. ✔ 3

Question Number : 22 Question Id : 89040114834 Question Type : MCQ Option Shuffling : No Display Question Number : Yes

Correct Marks : 1 Wrong Marks : 0

Equation of the circle with centre $(-3, 2)$ and radius 4 is

Options :

1. ✘ $(x^2 + 3)^2 + (y + 2)^2 = 4^2$

2. ✘ $(x - 3)^2 + (y + 2)^2 = 16$

3. ✔ $(x + 3)^2 + (y - 2)^2 = 16$

4. ✘ $(x - 2) + (y + 3)^2 = 4^2$

Question Number : 23 Question Id : 89040114835 Question Type : MCQ Option Shuffling : No Display Question Number : Yes

Correct Marks : 1 Wrong Marks : 0

The length of the latus rectum of the parabola $y^2 = 12x$ and the focal distance of the point $(3, -6)$ is

Options :

1. ✘ 3, 4

2. ✘ 2, 6

3. ✘ -12, 6

4. ✔ 12, 6

Question Number : 24 Question Id : 89040114836 Question Type : MCQ Option Shuffling : No Display Question Number : Yes

Correct Marks : 1 Wrong Marks : 0

The equation of the Parabola, whose focus is $(0, -2)$ and the vertex is $(0, 0)$, is

Options :

1. ✘ $y^2 = 32x$
2. ✔ $x^2 = -8y$
3. ✘ $x^2 = 4y$
4. ✘ $y^2 = -32x$

Question Number : 25 Question Id : 89040114837 Question Type : MCQ Option Shuffling : No Display Question Number : Yes

Correct Marks : 1 Wrong Marks : 0

The eccentricity of $x^2 + 2y^2 = 3$ is

Options :

1. ✘ $\frac{1}{\sqrt{2}}$
2. ✘ $\sqrt{2}$
3. ✘ $\pm\sqrt{2}$
4. ✔ $\frac{\sqrt{3}}{2}$

Question Number : 26 Question Id : 89040114838 Question Type : MCQ Option Shuffling : No Display Question Number : Yes

Correct Marks : 1 Wrong Marks : 0

$$\frac{d}{dx} [e^x(x^2 + 1)] =$$

Options :

1. ✓ $e^x(2x + x^2 + 1)$

2. ✗ $e^x(2x - x^2 + 1)$

3. ✗ $e^x(2x + x^3 + 1)$

4. ✗ $e^{-x}(2x + x^2 + 1)$

Question Number : 27 Question Id : 89040114839 Question Type : MCQ Option Shuffling : No Display Question Number : Yes

Correct Marks : 1 Wrong Marks : 0

$$\text{When } a > 0, \lim_{x \rightarrow 0} \frac{a^x - 1}{x} =$$

Options :

1. ✓ $\log a$

2. ✗ 0

3. ✗ $\log (x-1)$

4. ✗ $\log (x-a)$

Question Number : 28 Question Id : 89040114840 Question Type : MCQ Option Shuffling : No Display Question Number : Yes

Correct Marks : 1 Wrong Marks : 0

$$\frac{d}{dx} [\tan^{-1}x] =$$

Options :

1. ✓ $\frac{1}{x^2+1}$

2. ✗ $-\frac{1}{x^2-1}$

3. ✗ $\frac{2}{x^2+2}$

4. ✗ $-\frac{1}{x^2+1}$

Question Number : 29 Question Id : 89040114841 Question Type : MCQ Option Shuffling : No Display Question Number : Yes

Correct Marks : 1 Wrong Marks : 0

If $4x-7y+15=0$ then derivative of y with respect to x is

Options :

1. ✗ $-4/7$

2. ✗ 0

3. ✗ 4

4. ✓ $4/7$

Question Number : 30 Question Id : 89040114842 Question Type : MCQ Option Shuffling : No Display Question Number : Yes

Correct Marks : 1 Wrong Marks : 0

If $y = \cos x$ then $\frac{d^2y}{dx^2} =$

Options :

1. ✓ $-\cos x$

2. ✗ $-\sin x$

3. ✗ $\cos x$

4. ✗ $\sin x$

Question Number : 31 Question Id : 89040114843 Question Type : MCQ Option Shuffling : No Display Question Number : Yes

Correct Marks : 1 Wrong Marks : 0

If $u = e^x \sin y$ then first partial derivative of u with respect to y is

Options :

1. ✗ $e^x \sin y$

2. ✓ $e^x \cos y$

3. ✗ $-e^x \cos y$

4. ✗ 0

Question Number : 32 Question Id : 89040114844 Question Type : MCQ Option Shuffling : No Display Question Number : Yes

Correct Marks : 1 Wrong Marks : 0

$$\frac{d}{dx} \left(e^{3 \log x} \right) =$$

Options :

1. ✗ $\log x$

2. ✗

3x

3. ✘ x^3

4. ✔ $3x^2$

Question Number : 33 Question Id : 89040114845 Question Type : MCQ Option Shuffling : No Display Question Number : Yes

Correct Marks : 1 Wrong Marks : 0

If $u(x,y) = \sin^{-1}\frac{x}{y} + \tan^{-1}\frac{y}{x}$ then $xu_x + yu_y =$

Options :

1. ✘ $u'(x,y)$

2. ✔ 0

3. ✘ 1

4. ✘ $u(x, y)$

Question Number : 34 Question Id : 89040114846 Question Type : MCQ Option Shuffling : No Display Question Number : Yes

Correct Marks : 1 Wrong Marks : 0

If $S = 12t - 3t^2$ then $\frac{ds}{dt} =$

Options :

1. ✔ $12 - 6t$

2. ✘ $12t - 6$

3. ✘

$$12 - 3t$$

4. ✘ $12 - 6t^2$

Question Number : 35 Question Id : 89040114847 Question Type : MCQ Option Shuffling : No
Display Question Number : Yes
Correct Marks : 1 Wrong Marks : 0

$$\int \cot^2 x \, dx =$$

Options :

1. ✘ $-\cot x + x + c$

2. ✘ $\cot x - x + c$

3. ✘ $\cot^2 x - x + c$

4. ✔ $-\cot x - x + c$

Question Number : 36 Question Id : 89040114848 Question Type : MCQ Option Shuffling : No
Display Question Number : Yes
Correct Marks : 1 Wrong Marks : 0

$$\int \frac{1}{\sqrt{a^2 - x^2}} \, dx =$$

Options :

1. ✘ $\log|x + \sqrt{x^2 + a^2}| + c$

2. ✘ $\log|x + \sqrt{x^2 - a^2}| + c$

3. ✔ $\sin^{-1} \frac{x}{a} + c$

4. ✘ $\sin^{-1}x$

Question Number : 37 Question Id : 89040114849 Question Type : MCQ Option Shuffling : No Display Question Number : Yes

Correct Marks : 1 Wrong Marks : 0

$$\int e^x \cos x \, dx =$$

Options :

1. ✔ $\frac{1}{2}e^x(\cos x + \sin x) + c$

2. ✘ $\frac{1}{2}e^x \cos x$

3. ✘ $\frac{1}{2}e^x(\cos x + \operatorname{cosec} x) + c$

4. ✘ $\frac{1}{2}e^x(\cos x - \sin x) + c$

Question Number : 38 Question Id : 89040114850 Question Type : MCQ Option Shuffling : No Display Question Number : Yes

Correct Marks : 1 Wrong Marks : 0

$$\int \frac{dx}{\sqrt{x}} =$$

Options :

1. ✘ $-2\sqrt{x} + c$

2. ✘ $\sqrt{x} + c$

3. ✔ $2\sqrt{x} + c$

4. ✘ $x + c$

Question Number : 39 Question Id : 89040114851 Question Type : MCQ Option Shuffling : No Display Question Number : Yes

Correct Marks : 1 Wrong Marks : 0

$$\int \sin \frac{y}{2} dy =$$

Options :

1. ✘ $2 \cos \frac{y}{2} + c$

2. ✘ $2 \sin x/2 + c$

3. ✘ $2 \cos 2y + c$

4. ✔ $-2 \cos \frac{y}{2} + c$

Question Number : 40 Question Id : 89040114852 Question Type : MCQ Option Shuffling : No Display Question Number : Yes

Correct Marks : 1 Wrong Marks : 0

$$\int_0^{\pi} dx =$$

Options :

1. ✘ $\frac{\pi}{2}$

2. ✘ $-\frac{\pi}{2}$

3. ✔ π

4. ✘ $\frac{\pi}{8}$

Question Number : 41 Question Id : 89040114853 Question Type : MCQ Option Shuffling : No Display Question Number : Yes

Correct Marks : 1 Wrong Marks : 0

If $f(x)$ is an even function, then $\int_{-a}^a f(x) dx =$

Options :

1. ✘ $\int_0^a f(x) dx$
2. ✔ $2 \int_0^a f(x) dx$
3. ✘ $2a$
4. ✘ 0

Question Number : 42 Question Id : 89040114854 Question Type : MCQ Option Shuffling : No Display Question Number : Yes

Correct Marks : 1 Wrong Marks : 0

The area under the curve $f(x) = \sin x$ in $[0, 2\pi]$ is

Options :

1. ✘ 1
2. ✘ 3
3. ✘ -4
4. ✔ 4

Question Number : 43 Question Id : 89040114855 Question Type : MCQ Option Shuffling : No Display Question Number : Yes

Correct Marks : 1 Wrong Marks : 0

When $a=b$ then $\int_a^b f(x)dx =$

Options :

1. ✘ b
2. ✔ 0
3. ✘ a
4. ✘ 2a

Question Number : 44 Question Id : 89040114856 Question Type : MCQ Option Shuffling : No Display Question Number : Yes Correct Marks : 1 Wrong Marks : 0

The Order of the differential equation $\left[\frac{d^2y}{dx^2} + \left(\frac{dy}{dx} \right)^3 \right]^{6/5} = 6y$ is

Options :

1. ✘ 3
2. ✔ 2
3. ✘ 6/5
4. ✘ 3

Question Number : 45 Question Id : 89040114857 Question Type : MCQ Option Shuffling : No Display Question Number : Yes Correct Marks : 1 Wrong Marks : 0

The Integrating factor of $\frac{dy}{dx} + 3x = 2y$ is

Options :

1. ✘

e^{3x}

2. ✓ e^{-2x}

3. ✗ e^x

4. ✗ 0

Question Number : 46 Question Id : 89040114858 Question Type : MCQ Option Shuffling : No
Display Question Number : Yes
Correct Marks : 1 Wrong Marks : 0

Transform $dx + xdy = e^{-y}\sec^2y dy$ into linear form

Options :

1. ✗ $\frac{dx}{dy} - x = e^{-y}\sec^2y$

2. ✗ $\frac{dx}{dy} = e^{-y}\sec^2y$

3. ✗ $\frac{dx}{dy} + x = e^{-y}\sec^2y + c$

4. ✓ $\frac{dx}{dy} + x = e^{-y}\sec^2y$

Question Number : 47 Question Id : 89040114859 Question Type : MCQ Option Shuffling : No
Display Question Number : Yes
Correct Marks : 1 Wrong Marks : 0

The necessary and sufficient condition for the differential equation $Mdx + Ndy = 0$ to be exact is

Options :

1. ✗

$$\frac{\partial M}{\partial y} = \frac{\partial N}{\partial y}$$

2. ✓ $\frac{\partial M}{\partial y} = \frac{\partial N}{\partial x}$

3. ✗ $\frac{\partial M}{\partial y} \neq \frac{\partial N}{\partial x}$

4. ✗ $\frac{\partial M}{\partial x} = \frac{\partial N}{\partial x}$

Question Number : 48 Question Id : 89040114860 Question Type : MCQ Option Shuffling : No Display Question Number : Yes

Correct Marks : 1 Wrong Marks : 0

Complementary function of the differential equation $(D^3 - 8)y = x$ is

Options :

1. ✗ $c_1 e^{2x} + e^x \{c_2 \cos(x\sqrt{3}) + c_3 \sin x\sqrt{3}\}$

2. ✗ $c_1 e^{2x} + e^{-x} (\cos\sqrt{3} + \sin\sqrt{3})$

3. ✗ $c_1 e^{-2x} + c_2 e^{-x} + c_3 \cos x$

4. ✓ $c_1 e^{2x} + e^{-x} \{c_2 \cos(x\sqrt{3}) + c_3 \sin(x\sqrt{3})\}$

Question Number : 49 Question Id : 89040114861 Question Type : MCQ Option Shuffling : No Display Question Number : Yes

Correct Marks : 1 Wrong Marks : 0

Bernoulli's equation is of the form

Options :

1. ✘ $\left(\frac{dy}{dx}\right) + y = Qy$

2. ✘ $\left(\frac{dy}{dx}\right)^2 + y^n = Qy$

3. ✔ $\left(\frac{dy}{dx}\right) + Py = Qy^n$

4. ✘ $\left(\frac{d^2y}{dx^2}\right) + Py = Qy^n$

Question Number : 50 Question Id : 89040114862 Question Type : MCQ Option Shuffling : No Display Question Number : Yes

Correct Marks : 1 Wrong Marks : 0

Particular integral of $f(D)y = \cos ax$ is

Options :

1. ✔ $\frac{1}{f(-a^2)} \cos ax$ if $f(-a^2) \neq 0$

2. ✘ $\frac{1}{f(a^2)} \cos ax$ if $f(-a^2) \neq 0$

3. ✘ $\frac{1}{f(a)} \cos ax$ if $f(-a^2) \neq 0$

4. ✘ $\frac{1}{2} \cos ax$ if $f(-a^2) \neq 0$

Physics

Section Id :	890401292
Section Number :	2
Section type :	Online
Mandatory or Optional :	Mandatory
Number of Questions :	25
Number of Questions to be attempted :	25
Section Marks :	25
Maximum Instruction Time :	0
Sub-Section Number :	1
Sub-Section Id :	890401316
Question Shuffling Allowed :	Yes

Question Number : 51 Question Id : 89040114863 Question Type : MCQ Option Shuffling : No
Display Question Number : Yes

Correct Marks : 1 Wrong Marks : 0

If the unit of mass is 1 Kg, the unit of length is 1m and the unit of time is 1 minute,
the unit of pressure in Nm^{-2} is

Options :

1. ✘ $1/60$

2. ✘ 60

3. ✔ $1/3600$

4. ✘ 3600

Question Number : 52 Question Id : 89040114864 Question Type : MCQ Option Shuffling : No
Display Question Number : Yes

Correct Marks : 1 Wrong Marks : 0

MLT^{-1} is the dimensional formula for

Options :

1. ✘

2. ✘ Acceleration

3. ✔ Impulse

4. ✘ Force

Question Number : 53 Question Id : 89040114865 Question Type : MCQ Option Shuffling : No Display Question Number : Yes

Correct Marks : 1 Wrong Marks : 0

If $|\vec{A} \times \vec{B}| = \sqrt{3} \vec{A} \cdot \vec{B}$ then the value of $|\vec{A} + \vec{B}|$ is

Options :

1. ✔ $(A^2 + B^2 + AB)^{1/2}$

2. ✘ $(A^2 + B^2 + \frac{AB}{\sqrt{2}})^{1/2}$

3. ✘ $A + B$

4. ✘ $(A^2 + B^2 + \sqrt{3}AB)^{1/2}$

Question Number : 54 Question Id : 89040114866 Question Type : MCQ Option Shuffling : No Display Question Number : Yes

Correct Marks : 1 Wrong Marks : 0

Of the vectors given below, the parallel vectors are

$$\vec{A} = 6\hat{i} + 8\hat{j} \quad \vec{B} = 210\hat{i} + 280\hat{k} \quad \vec{C} = 5.1\hat{i} + 6.8\hat{j} \quad \vec{D} = 3.6\hat{i} + 8\hat{j} + 48\hat{k}$$

Options :

1. ✔ \vec{A} and \vec{C}

2. ✘ \vec{A} and \vec{B}

3. ✘ \vec{A} and \vec{D}

4. ✘ \vec{C} and \vec{D}

Question Number : 55 Question Id : 89040114867 Question Type : MCQ Option Shuffling : No Display Question Number : Yes

Correct Marks : 1 Wrong Marks : 0

The position x of a particle with respect to time ' t ' along x - axis is given by $x = 9t^2 - t^3$ where x is in metres and t in seconds. The position of this particle when it achieves maximum speed along the x direction is

Options :

1. ✘ 24 m

2. ✘ 32 m

3. ✔ 54 m

4. ✘ 81 m

Question Number : 56 Question Id : 89040114868 Question Type : MCQ Option Shuffling : No Display Question Number : Yes

Correct Marks : 1 Wrong Marks : 0

A ball is projected vertically up with a velocity of 40 ms^{-1} from ground. At the same time another ball is dropped from a height of 100 m. The magnitudes of their velocities are equal after

Options :

1. ✘ 1 s

2. ✓ 2 s

3. ✗ 3 s

4. ✗ 4 s

Question Number : 57 Question Id : 89040114869 Question Type : MCQ Option Shuffling : No Display Question Number : Yes

Correct Marks : 1 Wrong Marks : 0

Two stones are projected with the same speed but making different angles with the horizontal. Their horizontal ranges are equal. The angle of projection of one is $\pi/3$ and the maximum height reached by it is 102 metres. Then the maximum height reached by the other in metres is

Options :

1. ✗ 336

2. ✗ 224

3. ✗ 56

4. ✓ 34

Question Number : 58 Question Id : 89040114870 Question Type : MCQ Option Shuffling : No Display Question Number : Yes

Correct Marks : 1 Wrong Marks : 0

A projectile is thrown into air with velocity u at an angle θ to the horizontal. The time at which its direction of motion is perpendicular to its initial direction is

Options :

1. ✓ $\frac{u}{g \sin \theta}$

2. ✗

$$\frac{u}{g \cos \theta}$$

3. ✘ $\frac{u}{g \tan \theta}$

4. ✘ $\frac{u}{g \cot \theta}$

Question Number : 59 Question Id : 89040114871 Question Type : MCQ Option Shuffling : No Display Question Number : Yes Correct Marks : 1 Wrong Marks : 0

When a bicycle is in motion and pedalled, the force of friction exerted by ground on the two wheels is such that it acts

Options :

1. ✔ In the backward direction on the front wheel and in the forward direction on the rear wheel
2. ✘ In the forward direction on the front wheel and in the backward direction on the rear wheel
3. ✘ In the backward direction on both the front and rear wheels
4. ✘ In the forward direction on both the front and rear wheels

Question Number : 60 Question Id : 89040114872 Question Type : MCQ Option Shuffling : No Display Question Number : Yes Correct Marks : 1 Wrong Marks : 0

Two blocks of masses 4 Kg and 2 Kg are connected by a heavy string and placed on rough horizontal plane. The 2 Kg block is pulled with a constant force F. The coefficient of friction between the blocks and the ground is 0.5. The value of F so that tension in the string is constant throughout during the motion of the blocks is

Options :

1. ✘

40 N

2. ✓ 30 N

3. ✗ 50 N

4. ✗ 60 N

Question Number : 61 Question Id : 89040114873 Question Type : MCQ Option Shuffling : No Display Question Number : Yes

Correct Marks : 1 Wrong Marks : 0

In a hydroelectric power station, the height of the dam is 10 m. How many kilograms of water must fall per second on the blades of a turbine in order to generate 1 MW of electrical power? [$g = 10 \text{ m/s}^2$].

Options :

1. ✗ 10^3 Kg/s

2. ✓ 10^4 Kg/s

3. ✗ 10^5 Kg/s

4. ✗ 10^6 Kg/s

Question Number : 62 Question Id : 89040114874 Question Type : MCQ Option Shuffling : No Display Question Number : Yes

Correct Marks : 1 Wrong Marks : 0

The kinetic energy at the highest point of the trajectory of a projectile is 200 J. If the mass of the projectile is 1 Kg and the maximum height reached by it is 20 m, then velocity of the projectile from the ground is

Options :

1. ✘ 20 m/s
2. ✘ 10 m/s
3. ✔ $20\sqrt{2}$ m/s
4. ✘ $10\sqrt{2}$ m/s

Question Number : 63 Question Id : 89040114875 Question Type : MCQ Option Shuffling : No Display Question Number : Yes

Correct Marks : 1 Wrong Marks : 0

A force applied by an engine on train of mass 2.05×10^6 Kg changes its velocity from 5 m/s to 25 m/s in 5 minutes. The power of the engine is

Options :

1. ✘ 1.025 MW
2. ✔ 2.05 MW
3. ✘ 5 MW
4. ✘ 6 MW

Question Number : 64 Question Id : 89040114876 Question Type : MCQ Option Shuffling : No Display Question Number : Yes

Correct Marks : 1 Wrong Marks : 0

Two identical wires have a fundamental frequency of 100 Hz when kept under the same tension. If the tension of one of the wires is increased by 21%, the number of beats produced is

Options :

1. ✘ 11

2. ✓ 10

3. ✗ 9

4. ✗ 8

Question Number : 65 Question Id : 89040114877 Question Type : MCQ Option Shuffling : No Display Question Number : Yes

Correct Marks : 1 Wrong Marks : 0

A body executing S.H.M. has a maximum velocity of 1 ms^{-1} and a maximum acceleration of 4 ms^{-2} . Its amplitude in metres is:

Options :

1. ✗ 1

2. ✗ 0.75

3. ✗ 0.5

4. ✓ 0.25

Question Number : 66 Question Id : 89040114878 Question Type : MCQ Option Shuffling : No Display Question Number : Yes

Correct Marks : 1 Wrong Marks : 0

A simple pendulum of length l_1 has frequency $\frac{1}{4}$ Hz and another simple pendulum of length l_2 has frequency $\frac{1}{3}$ Hz. Then time period of pendulum of length $(l_1 - l_2)$ is

Options :

1. ✗ 5 s

2. ✗ 1 s

3. ✓ $\sqrt{7}$ s

4. ✗ $\sqrt{12}$ s

Question Number : 67 Question Id : 89040114879 Question Type : MCQ Option Shuffling : No Display Question Number : Yes

Correct Marks : 1 Wrong Marks : 0

A source of sound producing wavelength of 50 cm is moving away from stationary observer with $\frac{1}{5}$ th speed of sound. The wavelength of the sound heard by the observer is

Options :

1. ✗ 70 cm

2. ✗ 55 cm

3. ✗ 40 cm

4. ✓ 60 cm

Question Number : 68 Question Id : 89040114880 Question Type : MCQ Option Shuffling : No Display Question Number : Yes

Correct Marks : 1 Wrong Marks : 0

To have a good sound effect inside a hall

Options :

1. ✗ the hall should not have any sound absorbing material

2. ✗ the reverberation time has to be maximum

3. ✗ the reverberation time has to be zero

4. ✓ the reverberation time has to be optimum

Question Number : 69 Question Id : 89040114881 Question Type : MCQ Option Shuffling : No Display Question Number : Yes

Correct Marks : 1 Wrong Marks : 0

If the pressure of an ideal gas contained in a closed vessel is increased by 0.5%, the increase in temperature is 2°C . The initial temperature of the gas is

Options :

1. ✗ 27°C
2. ✓ 127°C
3. ✗ 300°C
4. ✗ 400°C

Question Number : 70 Question Id : 89040114882 Question Type : MCQ Option Shuffling : No Display Question Number : Yes

Correct Marks : 1 Wrong Marks : 0

During the free expansion of an ideal gas, which of the following physical quantity remains constant

Options :

1. ✓ Temperature
2. ✗ Pressure
3. ✗ Volume
4. ✗ Ratio of pressure to volume

Question Number : 71 Question Id : 89040114883 Question Type : MCQ Option Shuffling : No

Display Question Number : Yes

Correct Marks : 1 Wrong Marks : 0

The specific heat at constant volume for a monoatomic gas is 0.075 cal/kg/K and its gram molecular specific heat is 3 cal/mol/K . Then mass of one atom of that gas is

Options :

1. ✓ $6.67 \times 10^{-23} \text{ gm}$
2. ✗ $6.67 \times 10^{23} \text{ gm}$
3. ✗ $2 \times 10^{-23} \text{ gm}$
4. ✗ $2 \times 10^{23} \text{ gm}$

Question Number : 72 Question Id : 89040114884 Question Type : MCQ Option Shuffling : No
Display Question Number : Yes

Correct Marks : 1 Wrong Marks : 0

A rigid diatomic ideal gas undergoes an adiabatic process at room temperature. The relation between temperature and volume of this process is $TV^x = \text{constant}$. Then x is

Options :

1. ✗ $\frac{5}{3}$
2. ✓ $\frac{2}{5}$
3. ✗ $\frac{2}{3}$
4. ✗ $\frac{3}{5}$

Question Number : 73 Question Id : 89040114885 Question Type : MCQ Option Shuffling : No

Display Question Number : Yes

Correct Marks : 1 Wrong Marks : 0

A carnot engine having an efficiency of $\frac{1}{10}$ as heat engine, is used as a refrigerator. If the work done on the system is 10 J, the amount of energy absorbed from the reservoir at lower temperature is

Options :

1. ✘ 100 J

2. ✘ 99 J

3. ✔ 90 J

4. ✘ 80 J

Question Number : 74 Question Id : 89040114886 Question Type : MCQ Option Shuffling : No

Display Question Number : Yes

Correct Marks : 1 Wrong Marks : 0

Two photons of energy 2.5 eV and 3.5 eV fall on a metal surface of work function 1.5 eV.

The ratio of the maximum velocities of the photoelectrons emitted from the metal surface is

Options :

1. ✘ 1 : 4

2. ✘ 2 : 1

3. ✘ 1 : 2

4. ✔ 1 : $\sqrt{2}$

Question Number : 75 Question Id : 89040114887 Question Type : MCQ Option Shuffling : No

Display Question Number : Yes

Correct Marks : 1 Wrong Marks : 0

At critical angle, the angle of refraction is

Options :

1. ✘ 45^0
2. ✔ 90^0
3. ✘ 120^0
4. ✘ 180^0

Chemistry

Section Id :	890401293
Section Number :	3
Section type :	Online
Mandatory or Optional :	Mandatory
Number of Questions :	25
Number of Questions to be attempted :	25
Section Marks :	25
Maximum Instruction Time :	0
Sub-Section Number :	1
Sub-Section Id :	890401317
Question Shuffling Allowed :	Yes

Question Number : 76 Question Id : 89040114888 Question Type : MCQ Option Shuffling : No
Display Question Number : Yes

Correct Marks : 1 Wrong Marks : 0

The quantum number which describes the shape of an atomic orbital is indicated by the symbol

Options :

1. ✔ l
2. ✘ ml
3. ✘

4. ✘ n

Question Number : 77 Question Id : 89040114889 Question Type : MCQ Option Shuffling : No Display Question Number : Yes Correct Marks : 1 Wrong Marks : 0

“No two electrons in an atom can have the same set of four quantum numbers”.
This is known as

Options :

- 1. ✘ Pauli`s Principle
- 2. ✓ Hund`s Rule
- 3. ✘ Aufbau Principle
- 4. ✘ Lewis Rule

Question Number : 78 Question Id : 89040114890 Question Type : MCQ Option Shuffling : No Display Question Number : Yes Correct Marks : 1 Wrong Marks : 0

In the elements with atomic number $Z=1$ to $Z=20$,
how many of them have no unpaired electrons in their ground state?

Options :

- 1. ✘ 8
- 2. ✘ 4
- 3. ✘ 10
- 4. ✓ 6

Question Number : 79 Question Id : 89040114891 Question Type : MCQ Option Shuffling : No Display Question Number : Yes

Correct Marks : 1 Wrong Marks : 0

Which of the following is not a property of covalent compounds?

Options :

1. ✘ They are generally insoluble in water
2. ✘ They consist of molecules
3. ✘ They exist as solids, liquids or gases
4. ✔ The reactions between them are fast

Question Number : 80 Question Id : 89040114892 Question Type : MCQ Option Shuffling : No Display Question Number : Yes

Correct Marks : 1 Wrong Marks : 0

The sum of covalent bonds in H_2 , N_2 and HCl is

Options :

1. ✘ 4
2. ✔ 5
3. ✘ 6
4. ✘ 3

Question Number : 81 Question Id : 89040114893 Question Type : MCQ Option Shuffling : No Display Question Number : Yes

Correct Marks : 1 Wrong Marks : 0

How many grams of NaOH is required to prepare 5.0 litre of 0.1 N solution?

(Given: At. wt: H=1, O=16, Na=23)

Options :

1. ✓ 20
2. ✗ 30
3. ✗ 10
4. ✗ 50

Question Number : 82 Question Id : 89040114894 Question Type : MCQ Option Shuffling : No Display Question Number : Yes

Correct Marks : 1 Wrong Marks : 0

A gaseous mixture contains 8g of oxygen, 14 g of nitrogen and 8 g of hydrogen.

Total number of molecules present in the gaseous mixture is

(Given: At. wt: H=1, N=14, O=16, $N_A = 6 \times 10^{23} \text{ mol}^{-1}$)

Options :

1. ✗ 1.43×10^{23}
2. ✗ 2.85×10^{23}
3. ✓ 2.85×10^{24}
4. ✗ 1.85×10^{24}

Question Number : 83 Question Id : 89040114895 Question Type : MCQ Option Shuffling : No Display Question Number : Yes

Correct Marks : 1 Wrong Marks : 0

The equivalent weight of which of the following is the highest?

Options :

1. ✗ Na_2CO_3 (molecular weight = 106)

2. ✘ H_3PO_4 (molecular weight = 98)
3. ✔ $\text{H}_2\text{C}_2\text{O}_4 \cdot 2\text{H}_2\text{O}$ (molecular weight = 126)
4. ✘ AlCl_3 (molecular weight = 133.5)

Question Number : 84 Question Id : 89040114896 Question Type : MCQ Option Shuffling : No
Display Question Number : Yes
Correct Marks : 1 Wrong Marks : 0

At 25°C , ionic product (K_w) of 0.01M HCl solution is

Options :

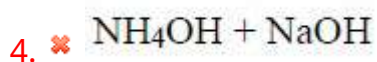
1. ✘ $1.0 \times 10^{-13} \text{ mol}^2/\text{L}^2$
2. ✘ $1.0 \times 10^{-12} \text{ mol}^2/\text{L}^2$
3. ✔ $1.0 \times 10^{-14} \text{ mol}^2/\text{L}^2$
4. ✘ $1.0 \times 10^{-15} \text{ mol}^2/\text{L}^2$

Question Number : 85 Question Id : 89040114897 Question Type : MCQ Option Shuffling : No
Display Question Number : Yes
Correct Marks : 1 Wrong Marks : 0

Which of the following combinations give a buffer solution?

Options :

1. ✘ HCl + NaCl
2. ✔ $\text{CH}_3\text{COOH} + \text{CH}_3\text{COONa}$



Question Number : 86 Question Id : 89040114898 Question Type : MCQ Option Shuffling : No Display Question Number : Yes

Correct Marks : 1 Wrong Marks : 0

A current of 0.5 amp is passed through molten AlCl_3 for 96.5 seconds. The volume of Cl_2 gas liberated at STP at anode (in ml) is ($\text{Cl} = 35.5 \text{ u}$) ($1\text{F} = 96500 \text{ C mol}^{-1}$)

Options :

1. ✘ 11.2

2. ✘ 22.4

3. ✔ 5.6

4. ✘ 33.6

Question Number : 87 Question Id : 89040114899 Question Type : MCQ Option Shuffling : No Display Question Number : Yes

Correct Marks : 1 Wrong Marks : 0

The amount of substance deposited due to passage of 1F of electricity is called

Options :

1. ✘ Atomic weight

2. ✔ Equivalent weight

3. ✘ Electrochemical equivalent

4. ✘ Molecular weight

Display Question Number : Yes

Correct Marks : 1 Wrong Marks : 0

What is the emf of the cell?



[Given $E_{\text{Sn}^{2+}|\text{Sn}}^0 = -0.14\text{V}$ and $E_{\text{Ag}^+|\text{Ag}}^0 = +0.80\text{V}$]

Options :

1. ✘ 0.66 V
2. ✘ 0.80 V
3. ✘ 1.08 V
4. ✔ 0.94 V

Question Number : 89 Question Id : 89040114901 Question Type : MCQ Option Shuffling : No

Display Question Number : Yes

Correct Marks : 1 Wrong Marks : 0

If the standard reduction potentials of A,B,C are respectively 0.68V, -2.54V and -0.50 V, then the order of their reducing power is

Options :

1. ✘ A>B>C
2. ✘ A>C>B
3. ✘ C>B>A
4. ✔ B>C>A

Question Number : 90 Question Id : 89040114902 Question Type : MCQ Option Shuffling : No

Display Question Number : Yes

Correct Marks : 1 Wrong Marks : 0

With which of the following anions, Mg^{2+} and Ca^{2+} ions form salts responsible for permanent hardness of water?

Options :

1. ✓ Cl^{-}, SO_4^{2-}
2. ✗ Cl^{-}, NO_2^{-}
3. ✗ HCO_3^{-}, Cl^{-}
4. ✗ CO_3^{2-}, HCO_3^{-}

Question Number : 91 Question Id : 89040114903 Question Type : MCQ Option Shuffling : No Display Question Number : Yes

Correct Marks : 1 Wrong Marks : 0

Exhausted permutit is regenerated by washing with

Options :

1. ✗ Dilute NaOH solution
2. ✓ Dilute NaCl solution
3. ✗ Dilute HCl solution
4. ✗ Dilute $AlCl_3$ solution

Question Number : 92 Question Id : 89040114904 Question Type : MCQ Option Shuffling : No Display Question Number : Yes

Correct Marks : 1 Wrong Marks : 0

27.2 mg of $CaSO_4$ and 2.4 mg of $MgSO_4$ are present in a 2 kg water sample.

What is the total hardness of water (in ppm) in terms of equivalents of $CaCO_3$?

(molecular weight of $CaSO_4 = 136$ & molecular weight of $MgSO_4 = 120$)

Options :

1. ✓ 11
2. ✗ 10
3. ✗ 20
4. ✗ 22

Question Number : 93 Question Id : 89040114905 Question Type : MCQ Option Shuffling : No Display Question Number : Yes

Correct Marks : 1 Wrong Marks : 0

Statement I: The lower the pH greater is the corrosion

Statement II: Electrochemical Corrosion always occurs at the anodic area.

The correct answer is

Options :

1. ✓ Both statement – I and Statement – II are correct
2. ✗ Both statement – I and Statement – II are not correct
3. ✗ Statement – I is correct but statement – II is not correct
4. ✗ Statement – I is not correct but statement – II is correct

Question Number : 94 Question Id : 89040114906 Question Type : MCQ Option Shuffling : No Display Question Number : Yes

Correct Marks : 1 Wrong Marks : 0

Rust is chemically

Options :

1. ✓ Hydrated Ferric Oxide

2. ✘ Hydrated Copper (II) Chloride
3. ✘ Hydrated Ferrous Sulphate
4. ✘ Hydrated Ferric Sulphate

Question Number : 95 Question Id : 89040114907 Question Type : MCQ Option Shuffling : No
Display Question Number : Yes
Correct Marks : 1 Wrong Marks : 0

The monomer of Teflon is X. The number of fluorine atoms in X is

Options :

1. ✘ 2
2. ✘ 3
3. ✔ 4
4. ✘ 1

Question Number : 96 Question Id : 89040114908 Question Type : MCQ Option Shuffling : No
Display Question Number : Yes
Correct Marks : 1 Wrong Marks : 0

Bakelite is an example of

Options :

1. ✘ Thermoplastic Polymer
2. ✘ Elastomer
3. ✘ Fibre

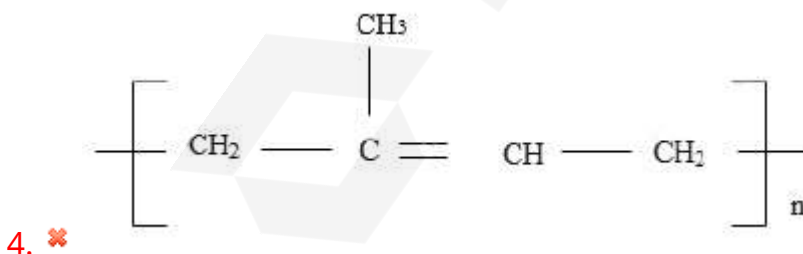
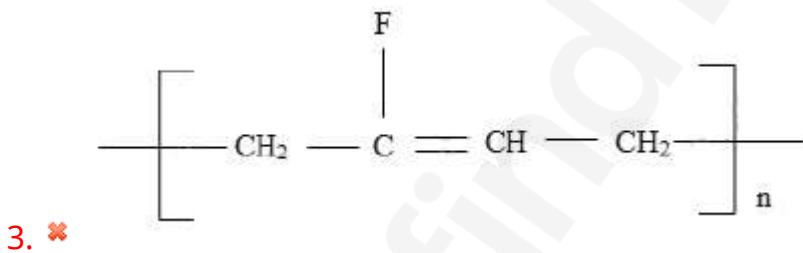
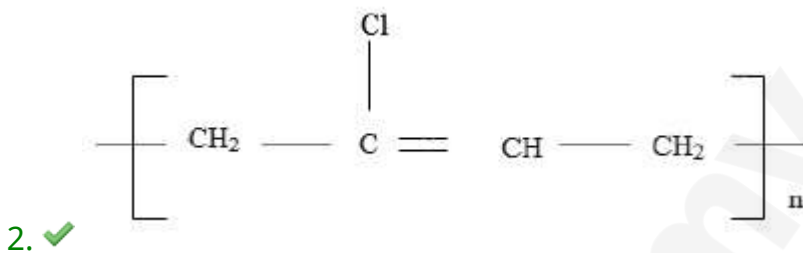
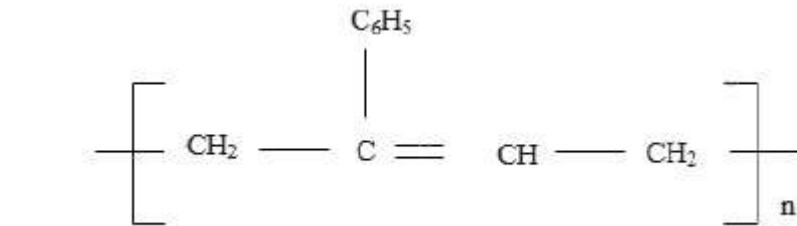
4. ✓ Thermosetting polymer

Question Number : 97 Question Id : 89040114909 Question Type : MCQ Option Shuffling : No Display Question Number : Yes

Correct Marks : 1 Wrong Marks : 0

The correct structure of neoprene rubber is

Options :



Question Number : 98 Question Id : 89040114910 Question Type : MCQ Option Shuffling : No Display Question Number : Yes

Correct Marks : 1 Wrong Marks : 0

Which of the following is NOT regarded as a primary fuel?

Options :

1. ✘ Natural gas
2. ✔ Coal gas
3. ✘ Lignite
4. ✘ Crude oil

Question Number : 99 Question Id : 89040114911 Question Type : MCQ Option Shuffling : No Display Question Number : Yes

Correct Marks : 1 Wrong Marks : 0

pH of acid rain water is generally in the range of

Options :

1. ✘ 1.0 - 3.0
2. ✔ 3.5 - 5.6
3. ✘ 5.9 - 6.9
4. ✘ 7.1 - 7.5

Question Number : 100 Question Id : 89040114912 Question Type : MCQ Option Shuffling : No Display Question Number : Yes

Correct Marks : 1 Wrong Marks : 0

In _____ part of the atmosphere ozone layer is present.

Options :

1. ✘ Troposphere
2. ✘ Thermosphere

3. ✓ Stratosphere

4. ✘ Mesosphere

Electronics and Communication Engineering

Section Id :	890401294
Section Number :	4
Section type :	Online
Mandatory or Optional :	Mandatory
Number of Questions :	100
Number of Questions to be attempted :	100
Section Marks :	100
Maximum Instruction Time :	0
Sub-Section Number :	1
Sub-Section Id :	890401318
Question Shuffling Allowed :	Yes

Question Number : 101 Question Id : 89040114913 Question Type : MCQ Option Shuffling : No
Display Question Number : Yes
Correct Marks : 1 Wrong Marks : 0

A cascaded stage of three amplifiers has individual voltage gains of 25, 10 and 4.

Its overall gain in dB is

Options :

1. ✘ 30

2. ✘ 39

3. ✓ 60

4. ✘ 1000

Question Number : 102 Question Id : 89040114914 Question Type : MCQ Option Shuffling : No
Display Question Number : Yes

Correct Marks : 1 Wrong Marks : 0

The temperature coefficient of a metal is ___ and that of a semiconductor is ___ respectively

Options :

1. ✓ + ve, - ve
2. ✗ + ve, + ve
3. ✗ - ve, + ve
4. ✗ - ve, - ve

Question Number : 103 Question Id : 89040114915 Question Type : MCQ Option Shuffling : No Display Question Number : Yes

Correct Marks : 1 Wrong Marks : 0

For a transistor if $\alpha = 0.98$ and emitter current I_E is 2 mA then the collector current is

Options :

1. ✗ 0.44 mA
2. ✗ 0.88 mA
3. ✓ 1.96 mA
4. ✗ 3.32 mA

Question Number : 104 Question Id : 89040114916 Question Type : MCQ Option Shuffling : No Display Question Number : Yes

Correct Marks : 1 Wrong Marks : 0

The gain of an amplifier with positive feedback is given by the relation

Options :

1. ✗ $A/1+A\beta$

2. ✘ $\beta/1+A\beta$

3. ✘ $\beta/1-A\beta$

4. ✔ $A/1-A\beta$

Question Number : 105 Question Id : 89040114917 Question Type : MCQ Option Shuffling : No Display Question Number : Yes

Correct Marks : 1 Wrong Marks : 0

The junction capacitance of a PN junction depends on

Options :

1. ✘ applied voltage only

2. ✘ barrier potential

3. ✔ both doping concentration and applied voltage

4. ✘ doping concentration only

Question Number : 106 Question Id : 89040114918 Question Type : MCQ Option Shuffling : No Display Question Number : Yes

Correct Marks : 1 Wrong Marks : 0

A JFET

Options :

1. ✘ is a current controlled device

2. ✘ has low input resistance

3. ✘ has high gate current

4. ✔ is a voltage controlled device

Question Number : 107 Question Id : 89040114919 Question Type : MCQ Option Shuffling : No Display Question Number : Yes

Correct Marks : 1 Wrong Marks : 0

Compared to bipolar junction transistor, JFET has

Options :

1. ✘ lower input impedance
2. ✘ high input impedance and high voltage gain
3. ✘ higher voltage gain
4. ✔ high input impedance and low voltage gain

Question Number : 108 Question Id : 89040114920 Question Type : MCQ Option Shuffling : No Display Question Number : Yes

Correct Marks : 1 Wrong Marks : 0

In the transfer characteristic of an n-channel MOSFET the region of $V_{GS} > 0$ corresponds to region.

Options :

1. ✘ constant current
2. ✔ enhancement
3. ✘ depletion
4. ✘ saturation

Question Number : 109 Question Id : 89040114921 Question Type : MCQ Option Shuffling : No Display Question Number : Yes

Correct Marks : 1 Wrong Marks : 0

The main advantage of using crystal oscillator is

Options :

1. ✓ constant frequency of oscillations
2. ✗ suitable for low voltages
3. ✗ high efficiency
4. ✗ high output voltage

Question Number : 110 Question Id : 89040114922 Question Type : MCQ Option Shuffling : No Display Question Number : Yes

Correct Marks : 1 Wrong Marks : 0

The lower cut-off frequency of N cascaded stages is given by

Options :

1. ✗ $f_1(2^{\frac{1}{n}} - 1)^{\frac{1}{2}}$
2. ✓ $\frac{f_1}{\sqrt{2^{\frac{1}{n}} - 1}}$
3. ✗ nf_1
4. ✗ $\frac{nf_1}{\sqrt{2^{\frac{1}{n}} - 1}}$

Question Number : 111 Question Id : 89040114923 Question Type : MCQ Option Shuffling : No Display Question Number : Yes

Correct Marks : 1 Wrong Marks : 0

For a fixed bias circuit the stability factor is

Options :

1. ✘ $\frac{1}{\beta+1}$

2. ✘ $\beta - 1$

3. ✘ $\frac{1}{\beta-1}$

4. ✔ $1 + \beta$

Question Number : 112 Question Id : 89040114924 Question Type : MCQ Option Shuffling : No Display Question Number : Yes

Correct Marks : 1 Wrong Marks : 0

Most commonly used bias in BJT amplifier circuit is

Options :

1. ✘ fixed bias

2. ✔ self bias

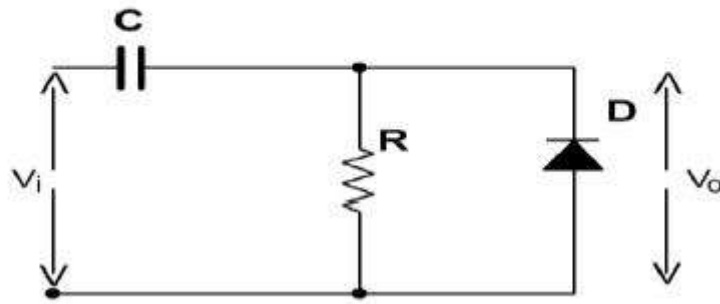
3. ✘ collector to base bias

4. ✘ collector feedback bias

Question Number : 113 Question Id : 89040114925 Question Type : MCQ Option Shuffling : No Display Question Number : Yes

Correct Marks : 1 Wrong Marks : 0

The circuit shown in the figure is a



Options :

1. ✘ negative damper
2. ✘ positive peak clipper
3. ✔ positive clamper
4. ✘ differentiator

Question Number : 114 Question Id : 89040114926 Question Type : MCQ Option Shuffling : No Display Question Number : Yes

Correct Marks : 1 Wrong Marks : 0

An amplifier having noise figure of 3 dB and available power gain of 20 dB is

followed by a mixer circuit having noise figure 10dB. The overall noise figure is numerically equal to

Options :

1. ✔ 2.09
2. ✘ 3.45
3. ✘ 2.90
4. ✘ 4.5

The total phase shift of loop in phase shift oscillator is

Options :

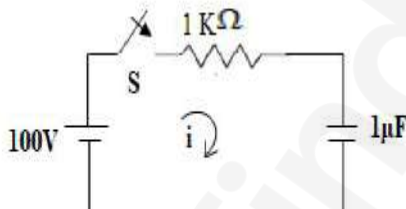
1. ✘ 45°
2. ✘ 90°
3. ✘ 180°
4. ✔ 360°

Question Number : 116 Question Id : 89040114928 Question Type : MCQ Option Shuffling : No

Display Question Number : Yes

Correct Marks : 1 Wrong Marks : 0

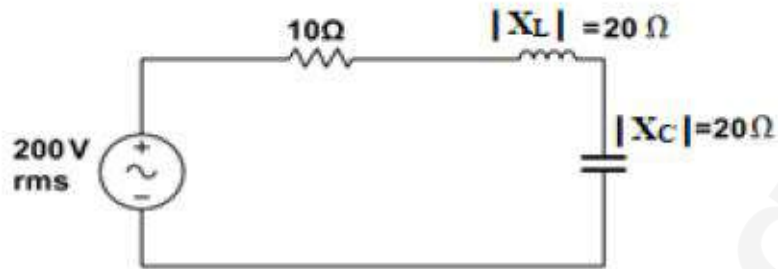
In the network shown in the given figure, the switch S is closed at $t = 0$ with the capacitor uncharged. The value of $\frac{di}{dt}$ at $t = 0^+$ will be



Options :

1. ✘ 200 amp/sec
2. ✔ 100 amp/sec
3. ✘ -100 amp/sec
4. ✘ -200 amp/sec

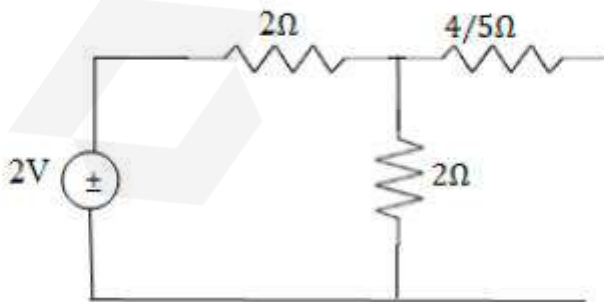
For RLC circuit shown below, the rms voltage across the capacitor is



Options :

1. ✘ $200 \angle -90^\circ \text{ V}$
2. ✘ $100 \angle -90^\circ \text{ V}$
3. ✔ $400 \angle -90^\circ \text{ V}$
4. ✘ $400 \angle 90^\circ \text{ V}$

Find the Norton's equivalent of the circuit given below



Options :

1. ✘ $\frac{5}{2} \text{ A}, 2 \Omega$

2. ✓ $\frac{2}{5}$ A, 2Ω

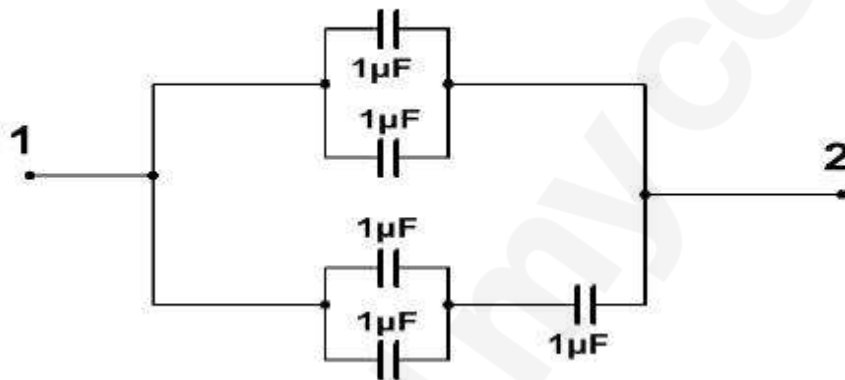
3. ✗ $\frac{5}{2}$ A, 1Ω

4. ✗ $\frac{2}{5}$ A, 1Ω

Question Number : 119 Question Id : 89040114931 Question Type : MCQ Option Shuffling : No Display Question Number : Yes

Correct Marks : 1 Wrong Marks : 0

The total capacitance across points '1' and '2' in the circuit shown is



Options :

1. ✗ $0.66 \mu\text{F}$

2. ✗ $4.66 \mu\text{F}$

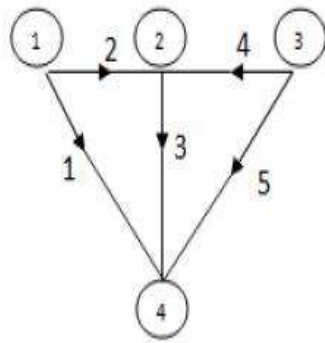
3. ✗ $3.66 \mu\text{F}$

4. ✓ $2.66 \mu\text{F}$

Question Number : 120 Question Id : 89040114932 Question Type : MCQ Option Shuffling : No Display Question Number : Yes

Correct Marks : 1 Wrong Marks : 0

Which one of the following represents the total number of trees in the graph given in the figure



Options :

- 1. ✘ 4
- 2. ✘ 7
- 3. ✔ 8
- 4. ✘ 6

Question Number : 121 Question Id : 89040114933 Question Type : MCQ Option Shuffling : No Display Question Number : Yes

Correct Marks : 1 Wrong Marks : 0

A lossless line will be distortion less if the phase shift

Options :

- 1. ✘ is constant with frequency
- 2. ✔ varies directly with frequency
- 3. ✘ has nothing to do with distortion on a lossless line
- 4. ✘ varies inversely with frequency

Question Number : 122 Question Id : 89040114934 Question Type : MCQ Option Shuffling : No Display Question Number : Yes

Correct Marks : 1 Wrong Marks : 0

On a transmission line with standing waves the distance between a voltage maximum and adjacent current maximum is

Options :

1. ✓ $\frac{\lambda}{4}$

2. ✗ $\frac{\lambda}{6}$

3. ✗ $\frac{\lambda}{2}$

4. ✗ $\frac{\lambda}{8}$

Question Number : 123 Question Id : 89040114935 Question Type : MCQ Option Shuffling : No Display Question Number : Yes

Correct Marks : 1 Wrong Marks : 0

In an ideal transmission line with matched load, the VSWR and reflection Coefficient are respectively

Options :

1. ✗ 1 and 1

2. ✗ 0 and 1

3. ✗ infinity and 0

4. ✓ 1 and 0

Question Number : 124 Question Id : 89040114936 Question Type : MCQ Option Shuffling : No Display Question Number : Yes

Correct Marks : 1 Wrong Marks : 0

A transmission line has a VSWR of 2 then the reflection coefficient is

Options :

1. ✘ $1/2$
2. ✘ 0
3. ✘ $1/4$
4. ✔ $1/3$

Question Number : 125 Question Id : 89040114937 Question Type : MCQ Option Shuffling : No Display Question Number : Yes

Correct Marks : 1 Wrong Marks : 0

The input impedance of short circuited loss less line of length less than a quarter wavelength is

Options :

1. ✘ purely resistive
2. ✘ purely capacitive
3. ✔ purely inductive
4. ✘ complex

Question Number : 126 Question Id : 89040114938 Question Type : MCQ Option Shuffling : No Display Question Number : Yes

Correct Marks : 1 Wrong Marks : 0

In India the TV channel bandwidth is

Options :

1. ✘ 3 MHz
2. ✔ 7 MHz

3. ✘ 5 MHz

4. ✘ 4 MHz

Question Number : 127 Question Id : 89040114939 Question Type : MCQ Option Shuffling : No Display Question Number : Yes Correct Marks : 1 Wrong Marks : 0

In broadcast television, the number of scanning per frame is chosen to be an odd number to

Options :

1. ✔ make interlacing easier

2. ✘ improve the picture resolution

3. ✘ reduce peak power requirement

4. ✘ reduce the required bandwidth

Question Number : 128 Question Id : 89040114940 Question Type : MCQ Option Shuffling : No Display Question Number : Yes Correct Marks : 1 Wrong Marks : 0

If the full-scale deflection current of a multimeter is $50 \mu\text{A}$, its sensitivity is

Options :

1. ✘ 10 K ohms/V

2. ✘ 100 K ohms/V

3. ✘ 50 K ohms/V

4. ✔ 20 K ohms/V

Question Number : 129 Question Id : 89040114941 Question Type : MCQ Option Shuffling : No Display Question Number : Yes

Correct Marks : 1 Wrong Marks : 0

The horizontal plates of CRO is supplied with following to observe the waveform

Options :

1. ✘ Sine wave
2. ✘ Cos wave
3. ✔ Sawtooth wave
4. ✘ Square wave

Question Number : 130 Question Id : 89040114942 Question Type : MCQ Option Shuffling : No Display Question Number : Yes

Correct Marks : 1 Wrong Marks : 0

Resistances can be measured with the help of

Options :

1. ✘ wattmeters
2. ✘ voltmeters
3. ✘ ammeters
4. ✔ ohmmeters and resistance bridges

Question Number : 131 Question Id : 89040114943 Question Type : MCQ Option Shuffling : No Display Question Number : Yes

Correct Marks : 1 Wrong Marks : 0

Two voltmeters have the same range 0-400 V. The internal resistances are 30,000 ohms and 20,000 ohms respectively.

When they are connected in series and applied voltage is 600 V, the readings are

Options :

1. ✓ 360 V and 240 V
2. ✗ 300 V each
3. ✗ 400 V and 200 V
4. ✗ One meter out of range and other 100V

Question Number : 132 Question Id : 89040114944 Question Type : MCQ Option Shuffling : No Display Question Number : Yes

Correct Marks : 1 Wrong Marks : 0

The function of Q-meter is to measure

Options :

1. ✗ Capacitance
2. ✗ Inductance
3. ✓ Quality factor of capacitor and inductor
4. ✗ Quality factor and form factor of capacitor and inductor

Question Number : 133 Question Id : 89040114945 Question Type : MCQ Option Shuffling : No Display Question Number : Yes

Correct Marks : 1 Wrong Marks : 0

Which of the following is a temperature measurement element?

Options :

1. ✓ Thermocouple
2. ✗ Pressure gauge

3. ✘ Flow meter

4. ✘ Tachometer

Question Number : 134 Question Id : 89040114946 Question Type : MCQ Option Shuffling : No
Display Question Number : Yes
Correct Marks : 1 Wrong Marks : 0

What is the function of a signal generator?

Options :

1. ✘ To measure temperature

2. ✔ To generate electrical signals

3. ✘ To measure pressure

4. ✘ To measure flow

Question Number : 135 Question Id : 89040114947 Question Type : MCQ Option Shuffling : No
Display Question Number : Yes
Correct Marks : 1 Wrong Marks : 0

Which of the following can be used to produce a square waveform ?

Options :

1. ✘ Wien bridge oscillators

2. ✘ T-oscillator

3. ✘ Hartley oscillator

4. ✔ Multivibrators

Question Number : 136 Question Id : 89040114948 Question Type : MCQ Option Shuffling : No Display Question Number : Yes

Correct Marks : 1 Wrong Marks : 0

Which of the following signals are generated by Wien-bridge oscillators?

Options :

1. ✘ Square wave
2. ✔ Sine wave
3. ✘ Triangular wave
4. ✘ Pulse wave

Question Number : 137 Question Id : 89040114949 Question Type : MCQ Option Shuffling : No Display Question Number : Yes

Correct Marks : 1 Wrong Marks : 0

The characteristic equation of a closed loop control system is given as $S^2+4S+16 = 0$.

The resonant frequency in rad/sec of the system is

Options :

1. ✘ 2
2. ✘ $2\sqrt{3}$
3. ✘ 4
4. ✔ $2\sqrt{2}$

Question Number : 138 Question Id : 89040114950 Question Type : MCQ Option Shuffling : No Display Question Number : Yes

Correct Marks : 1 Wrong Marks : 0

Natural frequency of a unity feedback control system of transfer function $G(s) = \frac{10}{s(s+1)}$ is

Options :

1. ✘ 0.5 rad/sec
2. ✔ 3.16 rad/sec
3. ✘ 4.6 rad/sec
4. ✘ 1 rad/sec

Question Number : 139 Question Id : 89040114951 Question Type : MCQ Option Shuffling : No Display Question Number : Yes

Correct Marks : 1 Wrong Marks : 0

The phenomenon of injection electro luminescence is the basis of working of

Options :

1. ✘ Photodiodes
2. ✔ Light Emitting Diodes
3. ✘ Phototransistors
4. ✘ Solar cells

Question Number : 140 Question Id : 89040114952 Question Type : MCQ Option Shuffling : No Display Question Number : Yes

Correct Marks : 1 Wrong Marks : 0

Consider the following statements in respect to a solar cell

- (i) a solar cell is a large area p-n junction
- (ii) in a solar cell the p-n junction is near the surface
- (iii) a solar cell is a photovoltaic device

Which of the statements given above are correct ?

Options :

- 1. ✓ 1, 2 and 3
- 2. ✗ 1 and 2
- 3. ✗ 2 and 3
- 4. ✗ 1 and 3

Question Number : 141 Question Id : 89040114953 Question Type : MCQ Option Shuffling : No Display Question Number : Yes

Correct Marks : 1 Wrong Marks : 0

Which of the following is active transducer ?

Options :

- 1. ✗ Strain Gauge
- 2. ✗ Thermistor
- 3. ✗ LVDT
- 4. ✓ Thermocouple

Question Number : 142 Question Id : 89040114954 Question Type : MCQ Option Shuffling : No Display Question Number : Yes

Correct Marks : 1 Wrong Marks : 0

What type of transducer is used to convert force into electrical signals?

Options :

1. ✘ LVDT
2. ✘ Potentiometer
3. ✔ Load cell
4. ✘ Thermocouple

Question Number : 143 Question Id : 89040114955 Question Type : MCQ Option Shuffling : No Display Question Number : Yes

Correct Marks : 1 Wrong Marks : 0

The two transistor model of a SCR consists of two following transistors

Options :

1. ✔ one n-p-n and other p-n-p
2. ✘ Both n-p-n
3. ✘ Both p-n-p
4. ✘ One n-p-n and other UJT

Question Number : 144 Question Id : 89040114956 Question Type : MCQ Option Shuffling : No Display Question Number : Yes

Correct Marks : 1 Wrong Marks : 0

To turn-off an SCR, it is necessary to reduce its current to less than

Options :

1. ✘ Trigger current
2. ✔ Holding current

3. ✘ Breakdown current

4. ✘ Forward current

Question Number : 145 Question Id : 89040114957 Question Type : MCQ Option Shuffling : No Display Question Number : Yes

Correct Marks : 1 Wrong Marks : 0

In a parallel inverter

Options :

1. ✔ Each thyristor is turned on twice during each cycle

2. ✘ Each thyristor is turned on once during each cycle

3. ✘ Each thyristor is turned on either once or twice during each cycle

4. ✘ Each thyristor may be turned on up to four times during each cycle

Question Number : 146 Question Id : 89040114958 Question Type : MCQ Option Shuffling : No Display Question Number : Yes

Correct Marks : 1 Wrong Marks : 0

The working principle of SMPS is based on

Options :

1. ✘ Integral control principle

2. ✘ Frequency control principle

3. ✔ Chopper principle

4. ✘ Phase control principle

Question Number : 147 Question Id : 89040114959 Question Type : MCQ Option Shuffling : No Display Question Number : Yes

Correct Marks : 1 Wrong Marks : 0

A 1000 KHz carrier is simultaneously modulated with 300 Hz and 2 KHz audio sine waves.

Which of the following frequencies will not be present in the output ?

Options :

1. ✓ 700 KHz
2. ✗ 998 KHz
3. ✗ 999.7 KHz
4. ✗ 1000.3 KHz

Question Number : 148 Question Id : 89040114960 Question Type : MCQ Option Shuffling : No Display Question Number : Yes

Correct Marks : 1 Wrong Marks : 0

An AM wave is given by $C(t) = 10(1 + 0.4 \cos 10^3 t + 0.3 \cos 10^4 t) \cos 10^6 t$.

The modulation index of the envelope is

Options :

1. ✗ 0.4
2. ✓ 0.5
3. ✗ 0.3
4. ✗ 0.9

Question Number : 149 Question Id : 89040114961 Question Type : MCQ Option Shuffling : No Display Question Number : Yes

Correct Marks : 1 Wrong Marks : 0

The envelope detector is

Options :

1. ✓ asynchronous detector
2. ✗ synchronous detector
3. ✗ coherent detector
4. ✗ product demodulator

Question Number : 150 Question Id : 89040114962 Question Type : MCQ Option Shuffling : No Display Question Number : Yes

Correct Marks : 1 Wrong Marks : 0

The SSB can be obtained from balanced modulator by connecting at its output a

Options :

1. ✓ filter
2. ✗ adder
3. ✗ buffer
4. ✗ clipper

Question Number : 151 Question Id : 89040114963 Question Type : MCQ Option Shuffling : No Display Question Number : Yes

Correct Marks : 1 Wrong Marks : 0

Which of the following circuits is an indirect method of generating FM ?

Options :

1. ✗ reactance modulator

2. ✘ varactor diode modulator
3. ✔ Armstrong modulator
4. ✘ balanced modulator

Question Number : 152 Question Id : 89040114964 Question Type : MCQ Option Shuffling : No Display Question Number : Yes

Correct Marks : 1 Wrong Marks : 0

The function of a pre-emphasis circuit in a communication system is to boost

Options :

1. ✘ the amplitude of modulated signal
2. ✔ the higher audio frequencies
3. ✘ the lower audio frequencies
4. ✘ the whole audio band

Question Number : 153 Question Id : 89040114965 Question Type : MCQ Option Shuffling : No Display Question Number : Yes

Correct Marks : 1 Wrong Marks : 0

In a commercial FM broadcasting the maximum frequency deviation is

Options :

1. ✘ 15 KHz
2. ✘ 20 KHz
3. ✘ 200 KHz
4. ✔

Question Number : 154 Question Id : 89040114966 Question Type : MCQ Option Shuffling : No Display Question Number : Yes

Correct Marks : 1 Wrong Marks : 0

A super heterodyne receiver with an IF of 450 KHz is tuned to a signal at 1200 KHz. The image frequency is

Options :

1. ✘ 900 KHz
2. ✘ 1800 KHz
3. ✔ 2100 KHz
4. ✘ 1550 KHz

Question Number : 155 Question Id : 89040114967 Question Type : MCQ Option Shuffling : No Display Question Number : Yes

Correct Marks : 1 Wrong Marks : 0

For $M > 4$, the signal constellation of M-ary PSK is

Options :

1. ✘ circular
2. ✘ rectangular
3. ✔ Elliptical
4. ✘ Line

Question Number : 156 Question Id : 89040114968 Question Type : MCQ Option Shuffling : No Display Question Number : Yes

Correct Marks : 1 Wrong Marks : 0

The Nyquist sampling rate for a signal band limited to 4 KHZ is

Options :

1. ✘ 5 KHZ
2. ✔ 8 KHZ
3. ✘ 2 KHZ
4. ✘ 16 KHZ

Question Number : 157 Question Id : 89040114969 Question Type : MCQ Option Shuffling : No Display Question Number : Yes

Correct Marks : 1 Wrong Marks : 0

The modulation method that represents bits as different phase shifts of a carrier is known as

Options :

1. ✘ ASK
2. ✘ FSK
3. ✔ PSK
4. ✘ MSK

Question Number : 158 Question Id : 89040114970 Question Type : MCQ Option Shuffling : No Display Question Number : Yes

Correct Marks : 1 Wrong Marks : 0

The data rate of a binary signal with a bit time 115 micro seconds is

Options :

1. ✘ 9600 K bits/sec
2. ✔

3. ✘ 6700 K bits/sec

4. ✘ 8200 K bits/sec

Question Number : 159 Question Id : 89040114971 Question Type : MCQ Option Shuffling : No Display Question Number : Yes

Correct Marks : 1 Wrong Marks : 0

The spectral density of white noise is

Options :

1. ✘ Exponential

2. ✔ Uniform

3. ✘ Random

4. ✘ Gaussian

Question Number : 160 Question Id : 89040114972 Question Type : MCQ Option Shuffling : No Display Question Number : Yes

Correct Marks : 1 Wrong Marks : 0

Long distance short wave radio broadcasting uses

Options :

1. ✘ ground wave

2. ✘ direct wave

3. ✔ ionosphere wave

4. ✘ space wave

Question Number : 161 Question Id : 89040114973 Question Type : MCQ Option Shuffling : No
Display Question Number : Yes

Correct Marks : 1 Wrong Marks : 0

Which of the following is not a travelling wave?

Options :

1. ✘ $e = E_m \sin(\beta x - \omega t)$

2. ✘ $e = E_m \cos(\beta x - \omega t)$

3. ✘ $e = E_m \sin(\omega t - \beta x)$

4. ✔ $e = E_m \sin(\beta x)$

Question Number : 162 Question Id : 89040114974 Question Type : MCQ Option Shuffling : No
Display Question Number : Yes

Correct Marks : 1 Wrong Marks : 0

A Reflex Klystron oscillator uses

Options :

1. ✔ one cavity resonator

2. ✘ two cavity resonator

3. ✘ three cavity resonator

4. ✘ four cavity resonator

Question Number : 163 Question Id : 89040114975 Question Type : MCQ Option Shuffling : No
Display Question Number : Yes

Correct Marks : 1 Wrong Marks : 0

Wave guide may be considered as

Options :

1. ✓ high pass filter
2. ✗ low pass filter
3. ✗ band pass filter
4. ✗ band stop filter

Question Number : 164 Question Id : 89040114976 Question Type : MCQ Option Shuffling : No Display Question Number : Yes

Correct Marks : 1 Wrong Marks : 0

Maximum effective aperture of a $\lambda/2$ dipole is

Options :

1. ✗ $0.013 \lambda^2$
2. ✗ $1.3 \lambda^2$
3. ✓ $0.13 \lambda^2$
4. ✗ $13 \lambda^2$

Question Number : 165 Question Id : 89040114977 Question Type : MCQ Option Shuffling : No Display Question Number : Yes

Correct Marks : 1 Wrong Marks : 0

Which of the following RADAR cannot be used for range measurement?

Options :

1. ✗ Pulsed

2. ✘ MTI

3. ✔ CW

4. ✘ FM CW

Question Number : 166 Question Id : 89040114978 Question Type : MCQ Option Shuffling : No Display Question Number : Yes

Correct Marks : 1 Wrong Marks : 0

A scope in RADAR systems displays

Options :

1. ✘ Target azimuth angle and range

2. ✘ Target azimuth angle alone

3. ✔ Target range alone

4. ✘ Target range and Elevation angle

Question Number : 167 Question Id : 89040114979 Question Type : MCQ Option Shuffling : No Display Question Number : Yes

Correct Marks : 1 Wrong Marks : 0

In a fibre optic system the source and detector respectively are

Options :

1. ✔ PN junction laser and a photo diode

2. ✘ PN junction laser and an LED

3. ✘ LED and a BJT

4. ✖ LED and a MOSFET

Question Number : 168 Question Id : 89040114980 Question Type : MCQ Option Shuffling : No Display Question Number : Yes

Correct Marks : 1 Wrong Marks : 0

The standard reference antenna for the directive gain is the

Options :

1. ✖ half wave dipole
2. ✔ isotropic antenna
3. ✖ infinitesimal dipole
4. ✖ elementary doublet

Question Number : 169 Question Id : 89040114981 Question Type : MCQ Option Shuffling : No Display Question Number : Yes

Correct Marks : 1 Wrong Marks : 0

The dominant mode in a rectangular waveguide is

Options :

1. ✖ TM_{01}
2. ✔ TE_{10}
3. ✖ TM_{11}
4. ✖ TE_{01}

Question Number : 170 Question Id : 89040114982 Question Type : MCQ Option Shuffling : No Display Question Number : Yes

Correct Marks : 1 Wrong Marks : 0

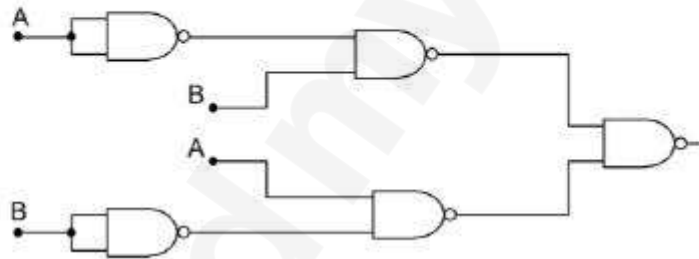
Which system allows the entire bandwidth available to each user at the same time ?

Options :

- 1. ✘ CSMA
- 2. ✘ GSM
- 3. ✔ CDMA
- 4. ✘ FDMA

Question Number : 171 Question Id : 89040114983 Question Type : MCQ Option Shuffling : No Display Question Number : Yes Correct Marks : 1 Wrong Marks : 0

Which type of gate is shown in the figure ?



Options :

- 1. ✔ EX-OR
- 2. ✘ OR
- 3. ✘ NOR
- 4. ✘ NAND

Question Number : 172 Question Id : 89040114984 Question Type : MCQ Option Shuffling : No Display Question Number : Yes Correct Marks : 1 Wrong Marks : 0

Full adder can be implemented by

Options :

1. ✘ decoders
2. ✔ multiplexers
3. ✘ AND & OR gates
4. ✘ half adders

Question Number : 173 Question Id : 89040114985 Question Type : MCQ Option Shuffling : No Display Question Number : Yes

Correct Marks : 1 Wrong Marks : 0

What is dual of $A + [B + (AC)] + D$?

Options :

1. ✘ $A[B+D]AC$
2. ✘ $A+[B(A+C)D]$
3. ✘ $A+[B(A+C)]+D$
4. ✔ $A[B(A+C)]D$

Question Number : 174 Question Id : 89040114986 Question Type : MCQ Option Shuffling : No Display Question Number : Yes

Correct Marks : 1 Wrong Marks : 0

NAND gate with positive logic will operate as

Options :

1. ✘ NOR with negative logic

2. ✘ AND with negative logic output
3. ✘ AND with negative logic
4. ✔ OR with negative logic input

Question Number : 175 Question Id : 89040114987 Question Type : MCQ Option Shuffling : No Display Question Number : Yes

Correct Marks : 1 Wrong Marks : 0

The main advantage of CMOS over TTL circuit is its

Options :

1. ✘ extremely low cost
2. ✘ increased speed of operation
3. ✔ much reduced power dissipation
4. ✘ very small physical size

Question Number : 176 Question Id : 89040114988 Question Type : MCQ Option Shuffling : No Display Question Number : Yes

Correct Marks : 1 Wrong Marks : 0

For emitter coupled logic the switching speed is very high because

Options :

1. ✘ negative logic is used
2. ✔ the transistors are not saturated when conducting
3. ✘ emitter coupled transistor are used

4. ✘ multi emitter transistors are used

Question Number : 177 Question Id : 89040114989 Question Type : MCQ Option Shuffling : No Display Question Number : Yes

Correct Marks : 1 Wrong Marks : 0

Minimum number of comparators needed to build a 6-bit simultaneous A/D converter is

Options :

1. ✔ 63
2. ✘ 64
3. ✘ 7
4. ✘ 6

Question Number : 178 Question Id : 89040114990 Question Type : MCQ Option Shuffling : No Display Question Number : Yes

Correct Marks : 1 Wrong Marks : 0

The figure of merit of a logic family is given by

Options :

1. ✘ gain bandwidth product
2. ✔ $(\text{propagation delay time}) * (\text{power dissipation})$
3. ✘ $(\text{fan out}) * (\text{propagation delay time})$
4. ✘ $(\text{noise margin}) * (\text{power dissipation})$

Question Number : 179 Question Id : 89040114991 Question Type : MCQ Option Shuffling : No Display Question Number : Yes

Correct Marks : 1 Wrong Marks : 0

A 10-bit ADC has a range of -5V to +5V, the resolution of the ADC is approximately

Options :

1. ✓ 10 mV
2. ✗ 100 mV
3. ✗ 0.5 V
4. ✗ 1V

Question Number : 180 Question Id : 89040114992 Question Type : MCQ Option Shuffling : No Display Question Number : Yes

Correct Marks : 1 Wrong Marks : 0

What is the minimum number of JK flip-flops required to realize a modulo-5 synchronous counter ?

Options :

1. ✗ 5
2. ✗ 2
3. ✗ 4
4. ✓ 3

Question Number : 181 Question Id : 89040114993 Question Type : MCQ Option Shuffling : No Display Question Number : Yes

Correct Marks : 1 Wrong Marks : 0

One megabyte is equivalent to

Options :

1. ✓ 2^{20} bytes

2. ✘ 2^{10} bytes

3. ✘ 2^{30} bytes

4. ✘ 2^{16} bytes

Question Number : 182 Question Id : 89040114994 Question Type : MCQ Option Shuffling : No Display Question Number : Yes

Correct Marks : 1 Wrong Marks : 0

A microcontroller differs from a microprocessor in that it has

Options :

1. ✔ both on-chip memory and on-chip ports

2. ✘ only on-chip memory but not on-chip ports

3. ✘ only on-chip ports but not on-chip memory

4. ✘ neither on-chip memory nor on-chip ports

Question Number : 183 Question Id : 89040114995 Question Type : MCQ Option Shuffling : No Display Question Number : Yes

Correct Marks : 1 Wrong Marks : 0

Which of the following I/O methods does not use the CPU for performing I/O operation ?

Options :

1. ✘ program initiated I/O

2. ✘ device initiated I/O

3. ✔ direct memory access

4. ✘ serial I/O

Question Number : 184 Question Id : 89040114996 Question Type : MCQ Option Shuffling : No Display Question Number : Yes

Correct Marks : 1 Wrong Marks : 0

The program counter in a computer is a special purpose register which contains

Options :

1. ✘ The instruction being executed
2. ✘ The address of the instruction being executed
3. ✘ The next instruction to be executed
4. ✔ The address of the next instruction to be executed

Question Number : 185 Question Id : 89040114997 Question Type : MCQ Option Shuffling : No Display Question Number : Yes

Correct Marks : 1 Wrong Marks : 0

8051 series has how many 16 bit registers ?

Options :

1. ✔ 2
2. ✘ 3
3. ✘ 1
4. ✘ 0

Question Number : 186 Question Id : 89040114998 Question Type : MCQ Option Shuffling : No

Display Question Number : Yes

Correct Marks : 1 Wrong Marks : 0

What is the status of carry, auxiliary carry and parity flags after execution of following instructions:

MOVA, #9C

ADDA, #64H

Options :

1. ✘ CY=0,AC=0,P=0
2. ✔ CY=1,AC=1,P=0
3. ✘ CY=0,AC=1,P=0
4. ✘ CY=1,AC=1,P=1

Question Number : 187 Question Id : 89040114999 Question Type : MCQ Option Shuffling : No

Display Question Number : Yes

Correct Marks : 1 Wrong Marks : 0

How are the bits of the register PSW affected if we select Bank2 of 8051 ?

Options :

1. ✘ PSW.5=0 and PSW.4=1
2. ✘ PSW.2=0 and PSW.3=1
3. ✘ PSW.3=1 and PSW.4=1
4. ✔ PSW.3=0 and PSW.4=1

Question Number : 188 Question Id : 89040115000 Question Type : MCQ Option Shuffling : No

Display Question Number : Yes

Correct Marks : 1 Wrong Marks : 0

How many bytes of bit addressable memory is present in 8051 microcontrollers ?

Options :

1. ✓ 32 bytes
2. ✗ 8 bytes
3. ✗ 16 bytes
4. ✗ 128 bytes

Question Number : 189 Question Id : 89040115001 Question Type : MCQ Option Shuffling : No Display Question Number : Yes

Correct Marks : 1 Wrong Marks : 0

On power up, the 8051 uses which RAM locations for register R0- R7?

Options :

1. ✓ 00-07
2. ✗ 00-2F
3. ✗ 00-7F
4. ✗ 00-0F

Question Number : 190 Question Id : 89040115002 Question Type : MCQ Option Shuffling : No Display Question Number : Yes

Correct Marks : 1 Wrong Marks : 0

Which instruction at the end of interrupt service program takes the execution back to the interrupted program ?

Options :

1. ✗ forward
2. ✓

return

3. ✘ data

4. ✘ line

Question Number : 191 Question Id : 89040115003 Question Type : MCQ Option Shuffling : No Display Question Number : Yes

Correct Marks : 1 Wrong Marks : 0

The instructions that involve various string manipulation operations are

Options :

1. ✘ branch instructions

2. ✘ flag manipulation instructions

3. ✘ shift and rotate instructions

4. ✔ string instructions

Question Number : 192 Question Id : 89040115004 Question Type : MCQ Option Shuffling : No Display Question Number : Yes

Correct Marks : 1 Wrong Marks : 0

In a memory map the lowest address of an 8 K byte RAM is 1000 H. What is the highest address ?

Options :

1. ✘ 8192 H

2. ✔ 2FFF H

3. ✘ 7FFF H

4. ✘

Question Number : 193 Question Id : 89040115005 Question Type : MCQ Option Shuffling : No
Display Question Number : Yes

Correct Marks : 1 Wrong Marks : 0

Which of the following memory units needs periodic refreshing ?

Options :

1. ✘ ROM
2. ✘ EPROM
3. ✘ Static ROM
4. ✔ Dynamic RAM

Question Number : 194 Question Id : 89040115006 Question Type : MCQ Option Shuffling : No
Display Question Number : Yes

Correct Marks : 1 Wrong Marks : 0

What is a Firewall in Computer Network ?

Options :

1. ✘ The physical boundary of Network
2. ✘ An operating System of Computer Network
3. ✔ A system designed to prevent unauthorized access
4. ✘ A web browsing Software

Question Number : 195 Question Id : 89040115007 Question Type : MCQ Option Shuffling : No
Display Question Number : Yes

Correct Marks : 1 Wrong Marks : 0

How many layers does OSI Reference Model has ?

Options :

1. ✘ 4
2. ✘ 5
3. ✘ 6
4. ✔ 7

Question Number : 196 Question Id : 89040115008 Question Type : MCQ Option Shuffling : No Display Question Number : Yes

Correct Marks : 1 Wrong Marks : 0

How many bits are there in the Ethernet address ?

Options :

1. ✘ 64 bits
2. ✔ 48 bits
3. ✘ 32 bits
4. ✘ 16 bits

Question Number : 197 Question Id : 89040115009 Question Type : MCQ Option Shuffling : No Display Question Number : Yes

Correct Marks : 1 Wrong Marks : 0

What does Router do in a network ?

Options :

1. ✘ Forwards a packet to all outgoing links

2. ✘ Forwards a packet to the next free outgoing link
3. ✔ Determines on which outgoing link a packet is to be forwarded
4. ✘ Forwards a packet to all outgoing links except the originated link

Question Number : 198 Question Id : 89040115010 Question Type : MCQ Option Shuffling : No
Display Question Number : Yes
Correct Marks : 1 Wrong Marks : 0

Which of the following is operating system ?

Options :

1. ✘ MS Word
2. ✘ Ventura
3. ✘ Java
4. ✔ Windows

Question Number : 199 Question Id : 89040115011 Question Type : MCQ Option Shuffling : No
Display Question Number : Yes
Correct Marks : 1 Wrong Marks : 0

MAC Address is the example of

Options :

1. ✘ Transport Layer
2. ✔ Data Link Layer
3. ✘ Application Layer

4. ✘ Physical Layer

Question Number : 200 Question Id : 89040115012 Question Type : MCQ Option Shuffling : No
Display Question Number : Yes

Correct Marks : 1 Wrong Marks : 0

Bluetooth is an example of

Options :

1. ✔ Personal area network

2. ✘ Local area network

3. ✘ Virtual private network

4. ✘ Wide area network

